

Name: _____

Score: _____

Morning Math

Today is: _____

Write the even numbers starting with 28.


--	--	--	--	--	--	--	--	--	--

Rhonda has \$57.25. She bought groceries that cost \$25.98. How much money does Rhonda have left?

*Please circle the clue words.
Please write and solve the problem.*


Rhonda has _____ left.

- Divide this rectangle in half. Follow the directions below:
- In the left half draw a duck.
- Under the rectangle, draw a square.
- Above the rectangle, draw a triangle.
- To the left of the rectangle, draw an oval.



Please measure the line to the nearest centimeter.

_____ cm



$$\begin{array}{r} 9 \\ + 7 \\ \hline \end{array}$$

$$\begin{array}{r} 58 \\ + 69 \\ \hline \end{array}$$

$$\begin{array}{r} 576 \\ + 355 \\ \hline \end{array}$$

$$\begin{array}{r} 5 \\ \times 5 \\ \hline \end{array}$$

$$\begin{array}{r} 734 \\ - 348 \\ \hline \end{array}$$

Name: _____

Score: _____

Homework Math

Today is: _____

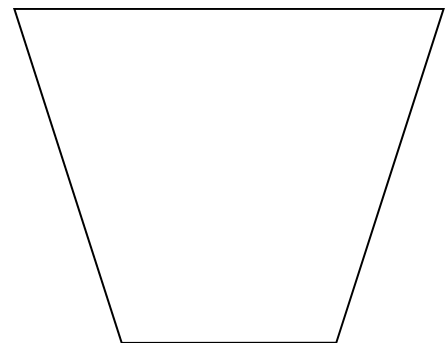
Please write the odd numbers beginning with 37.

--	--	--	--	--	--	--	--	--	--

Eric has 55 toy cars. Justin has 29 toy cars. Brad has 38 toy cars. How many toy cars do they have in all? *Please circle the clue words. Please write and solve the problem.*

They have _____ toy cars in all.

- Divide the trapezoid vertically in half.
- In the right half, draw small diamond.
- In the left half, draw a small triangle.
- Color the trapezoid yellow.
- Color the small triangle blue.



Continue this pattern.



$$\begin{array}{r} 6 \\ + 5 \\ \hline \end{array}$$

$$\begin{array}{r} 88 \\ + 37 \\ \hline \end{array}$$

$$\begin{array}{r} 518 \\ + 278 \\ \hline \end{array}$$

$$\begin{array}{r} 12 \\ - 3 \\ \hline \end{array}$$

$$\begin{array}{r} 40 \\ - 29 \\ \hline \end{array}$$