

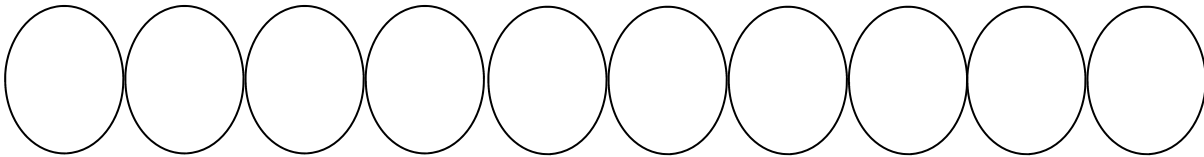
Name: \_\_\_\_\_

Score: \_\_\_\_\_

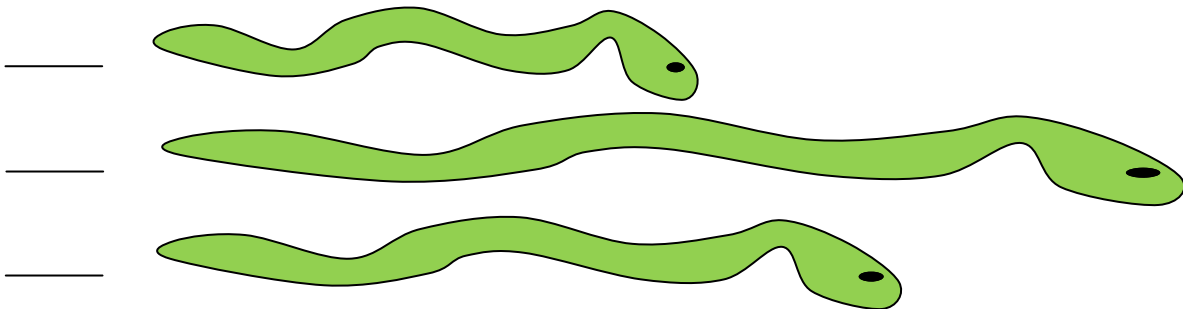
### Morning Math

Today is: \_\_\_\_\_

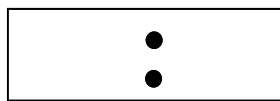
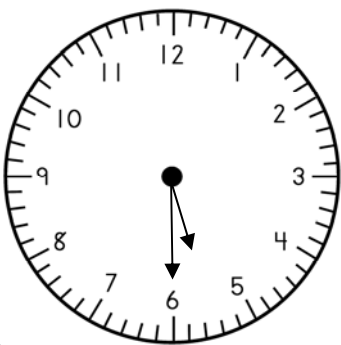
Write the numbers from 21 to 30. Color the number that comes before 25 orange.




- Please label the snakes in order of length from shortest to longest.



What is the time?



How many bat ears in all?



$$\begin{array}{r} 3 \\ + 3 \\ \hline \end{array} \quad \begin{array}{r} 5 \\ + 0 \\ \hline \end{array} \quad \begin{array}{r} 4 \\ + 4 \\ \hline \end{array}$$

$$\begin{array}{r} 5 \\ - 3 \\ \hline \end{array} \quad \begin{array}{r} 4 \\ - 2 \\ \hline \end{array} \quad \begin{array}{r} 7 \\ - 3 \\ \hline \end{array}$$

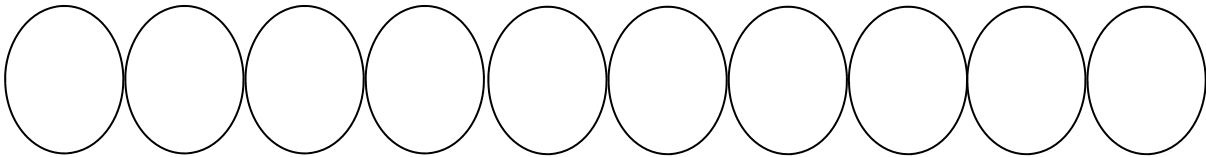
Name: \_\_\_\_\_

Score: \_\_\_\_\_

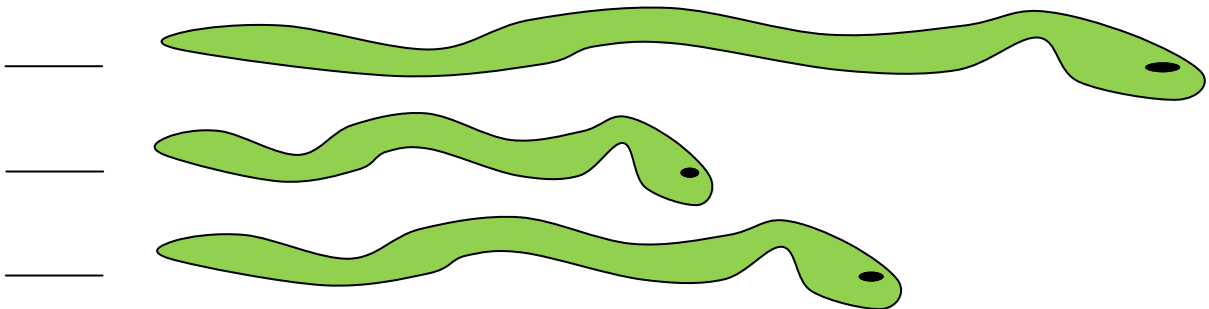
### Math Homework

Today is: \_\_\_\_\_

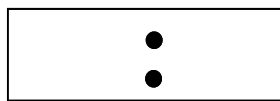
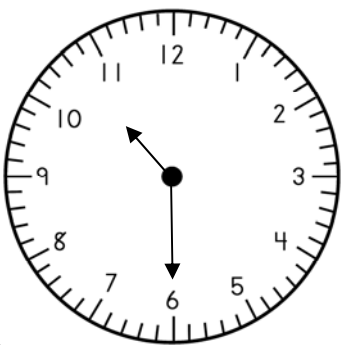
Write the numbers from 31 to 40. Color the number that comes after 37 blue.




- Please label the snakes in order of length from shortest to longest.



What is the time?



How many bat noses in all?



$$\begin{array}{r} 5 \\ + 5 \\ \hline \end{array} \quad \begin{array}{r} 3 \\ + 2 \\ \hline \end{array} \quad \begin{array}{r} 4 \\ + 3 \\ \hline \end{array}$$

$$\begin{array}{r} 6 \\ - 6 \\ \hline \end{array} \quad \begin{array}{r} 3 \\ - 1 \\ \hline \end{array} \quad \begin{array}{r} 5 \\ - 4 \\ \hline \end{array}$$

Name: \_\_\_\_\_

Score: \_\_\_\_\_

### Morning Math

Today is: \_\_\_\_\_

Write the numbers from 31 to 40. Color the number that comes between 36 and 38 blue.

--	--	--	--	--	--	--	--	--	--

- Jan counted 5 red fish and 6 blue fish.
- Draw to show the fish.

How many fish in all? \_\_\_\_\_














Find the missing numbers.

$$6 + \square = 9$$

$$5 - \square = 2$$

- Write the number represented by the tally marks.

~~||||~~ ~~||||~~ | \_\_\_\_\_

Toy plane						
Toy boat						
Toy car						

- More boys own a toy \_\_\_\_\_.

plane  boat  car

- How many boys own a toy boat?

6  3  4

$$\begin{array}{r} 5 \\ + 5 \\ \hline \end{array} \quad 3 + 4 = \underline{\quad}$$

$$\begin{array}{r} 6 \\ - 4 \\ \hline \end{array} \quad 7 - 6 = \underline{\quad}$$

Name: \_\_\_\_\_

Score: \_\_\_\_\_

### Math Homework

Today is: \_\_\_\_\_

Write the numbers from 41 to 50. Color the number that comes between 45 and 47 red.

--	--	--	--	--	--	--	--	--	--

- Pat counted 6 green fish and 3 blue fish.
- Draw to show the fish.

How many fish in all? \_\_\_\_\_
















Find the missing numbers.

$$5 + \square = 10$$

$$6 - \square = 2$$

- Write the number represented by the tally marks.

~~||||~~ ||| \_\_\_\_\_

Toy plane						
Toy boat						
Toy car						

- More boys own a toy \_\_\_\_\_.

plane  boat  car

- How many boys own a toy plane?

5  6  4

$$\begin{array}{r} 3 \\ + 3 \\ \hline \end{array} \quad 6 + 1 = \underline{\quad}$$

$$\begin{array}{r} 5 \\ - 4 \\ \hline \end{array} \quad 7 - 3 = \underline{\quad}$$

Name: \_\_\_\_\_

Score: \_\_\_\_\_

### Morning Math

Today is: \_\_\_\_\_

Write the numbers from 51 to 60. Color the number that is 1 less than 56 red.

○ ○ ○ ○ ○ ○ ○ ○ ○ ○

Create a tally mark chart showing:

- 6 kids like red
- 8 kids like blue
- 4 kids like yellow

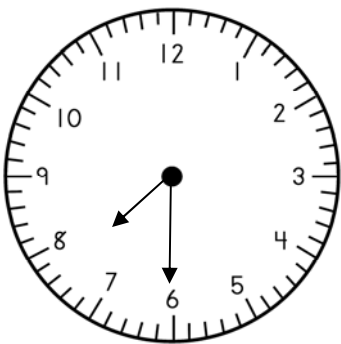
red	blue	yellow

Find the missing numbers.

$$\square + 4 = 8$$

$$\square + 3 = 5$$

What is the time?



□ : □

Mark the true statement.

- $3 + 4 = 4 + 3$
- $1 + 5 = 4 + 1$
- $5 + 2 = 3 + 5$

$$\begin{array}{r} 4 \\ + 3 \\ \hline \end{array} \quad \begin{array}{r} 2 \\ + 6 \\ \hline \end{array} \quad \begin{array}{r} 5 \\ + 1 \\ \hline \end{array}$$

$$\begin{array}{r} 5 \\ - 4 \\ \hline \end{array} \quad \begin{array}{r} 7 \\ - 3 \\ \hline \end{array}$$

Name: \_\_\_\_\_

Score: \_\_\_\_\_

### Math Homework

Today is: \_\_\_\_\_

Write the numbers from 61 to 70. Color the number that is 1 more than 63 blue.

○ ○ ○ ○ ○ ○ ○ ○ ○ ○

Create a tally mark chart showing:

- 9 kids like red
- 3 kids like blue
- 6 kids like yellow

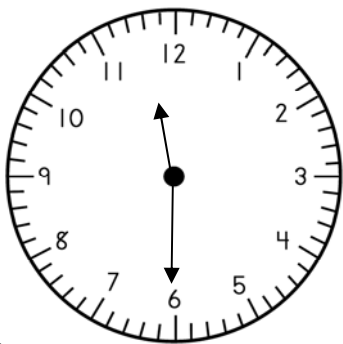
red	blue	yellow

Find the missing numbers.

$$\square + 1 = 6$$

$$\square + 3 = 6$$

What is the time?



□ : □

Mark the true statement.

- $5 + 3 = 2 + 7$
- $3 + 6 = 6 + 2$
- $7 + 1 = 1 + 7$

$$\begin{array}{r} 3 \\ + 2 \\ \hline \end{array} \quad \begin{array}{r} 4 \\ + 4 \\ \hline \end{array} \quad \begin{array}{r} 4 \\ + 2 \\ \hline \end{array}$$

$$\begin{array}{r} 6 \\ - 2 \\ \hline \end{array} \quad \begin{array}{r} 6 \\ - 6 \\ \hline \end{array}$$

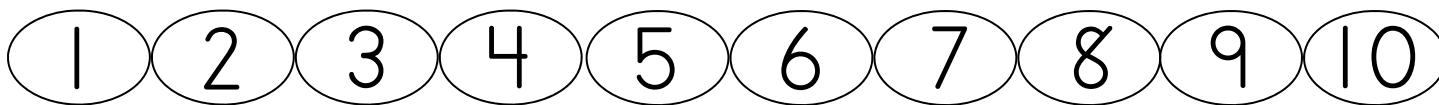
Name: \_\_\_\_\_

Score: \_\_\_\_\_

### Morning Math

Today is: \_\_\_\_\_

Color the even numbers blue. The even numbers are 2, 4, 6, 8, and 10.

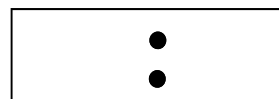
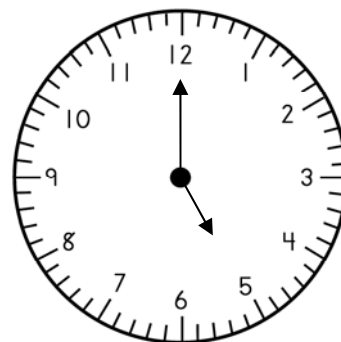


- Mark counted 6 red ovals and 5 blue ovals.
- Draw to show this.

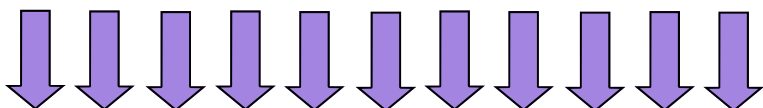
How many ovals did Mark count **altogether**?

\_\_\_\_\_

What is the time?



Cross out 6 arrows.



$$\begin{array}{r} 11 \\ - 6 \\ \hline \end{array}$$

How many arrows are left? \_\_\_\_\_

$$\begin{array}{r} 1 \\ + 4 \\ \hline \end{array} \quad \begin{array}{r} 6 \\ + 3 \\ \hline \end{array} \quad \begin{array}{r} 5 \\ + 2 \\ \hline \end{array}$$

$$\begin{array}{r} 7 \\ - 3 \\ \hline \end{array} \quad \begin{array}{r} 3 \\ - 3 \\ \hline \end{array} \quad \begin{array}{r} 6 \\ - 3 \\ \hline \end{array}$$

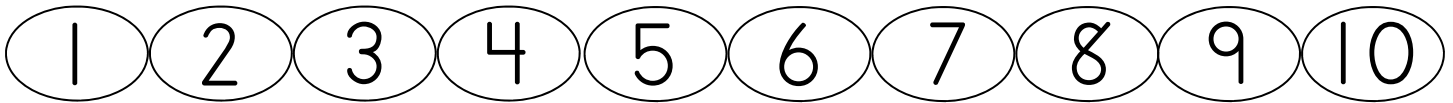
Name: \_\_\_\_\_

Score: \_\_\_\_\_

### Math Homework

Today is: \_\_\_\_\_

Color the odd numbers green. The odd numbers are 1, 3, 5, 7, and 9.

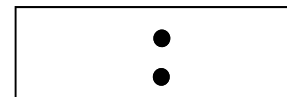
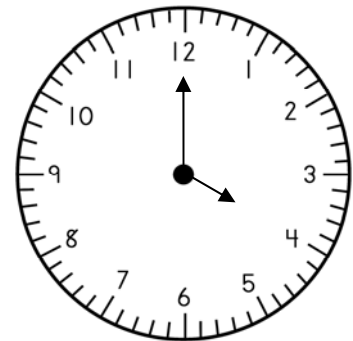


- Pat counted 6 red circles and 3 blue circles.
- Draw to show this.

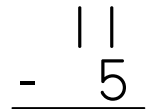
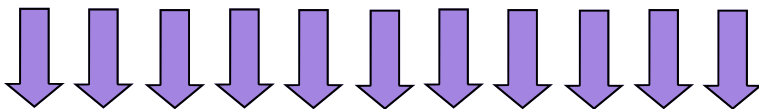
How many circles did Pat count **altogether**?

\_\_\_\_\_

What is the time?



Cross out 5 arrows.



How many arrows are left? \_\_\_\_\_

$$\begin{array}{r} 6 \\ + 3 \\ \hline \end{array} \quad \begin{array}{r} 4 \\ + 4 \\ \hline \end{array} \quad \begin{array}{r} 2 \\ + 3 \\ \hline \end{array}$$

$$\begin{array}{r} 6 \\ - 5 \\ \hline \end{array} \quad \begin{array}{r} 5 \\ - 3 \\ \hline \end{array} \quad \begin{array}{r} 6 \\ - 0 \\ \hline \end{array}$$



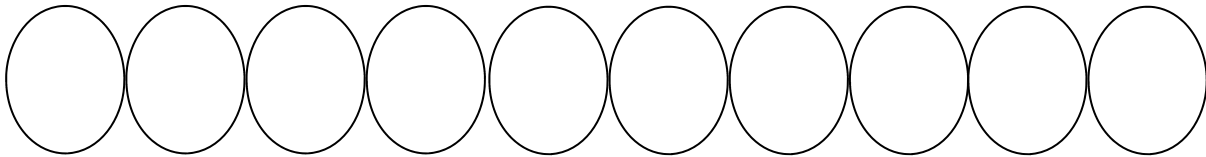
Name: \_\_\_\_\_

Score: \_\_\_\_\_

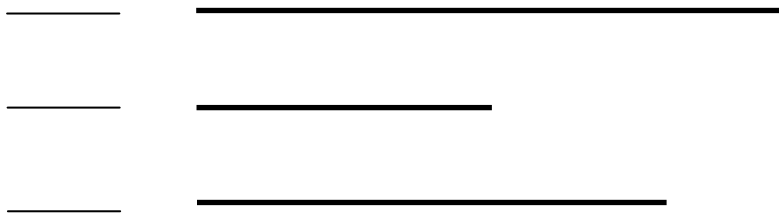
### Morning Math

Today is: \_\_\_\_\_

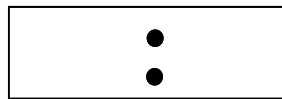
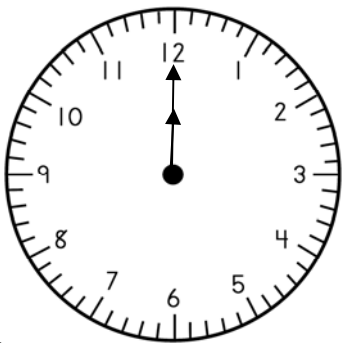
Write the numbers from 31 to 40. Color the number that comes before 37 orange.



- Please label the lines in order of length from shortest to longest.



What is the time?



How many bear ears?



$$\begin{array}{r} 5 \\ + 5 \\ \hline \end{array} \quad \begin{array}{r} 4 \\ + 2 \\ \hline \end{array} \quad \begin{array}{r} 3 \\ + 1 \\ \hline \end{array}$$

$$\begin{array}{r} 6 \\ - 6 \\ \hline \end{array} \quad \begin{array}{r} 4 \\ - 2 \\ \hline \end{array}$$

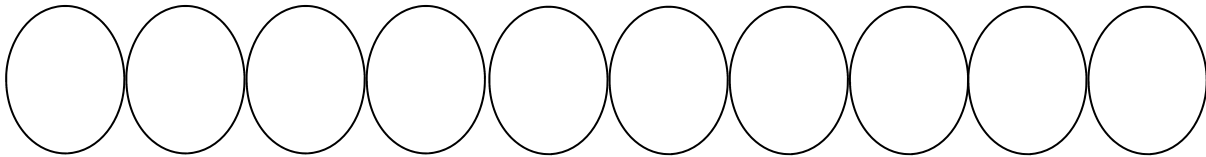
Name: \_\_\_\_\_

Score: \_\_\_\_\_


### Math Homework

Today is: \_\_\_\_\_

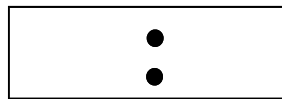
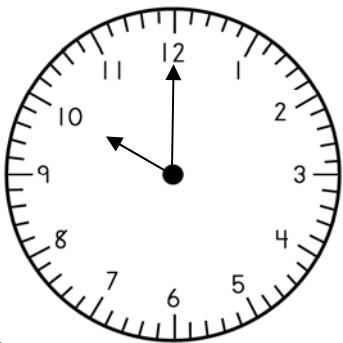
Write the numbers from 31 to 40. Color the number that comes after 33 orange.




- Please label the lines in order of length from shortest to longest.



What is the time?



How many bear noses?



$$\begin{array}{r} 2 \\ + 2 \\ \hline \end{array} \quad \begin{array}{r} 4 \\ + 4 \\ \hline \end{array} \quad \begin{array}{r} 5 \\ + 5 \\ \hline \end{array}$$

$$\begin{array}{r} 6 \\ - 3 \\ \hline \end{array} \quad \begin{array}{r} 5 \\ - 1 \\ \hline \end{array}$$