

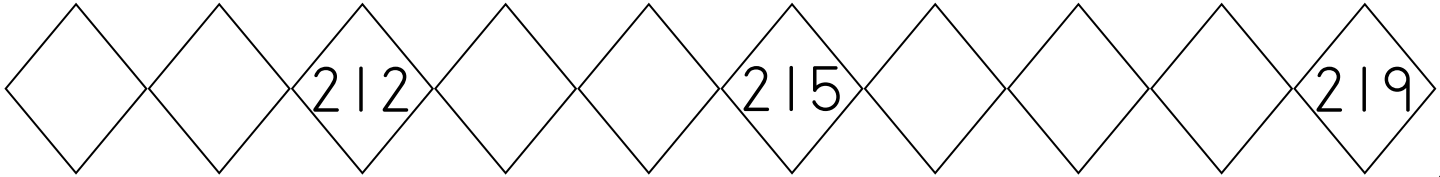
Name: _____

Score: _____

Morning Math Test

Today is: _____

Write the missing numbers. Color the number that comes before 217 orange.



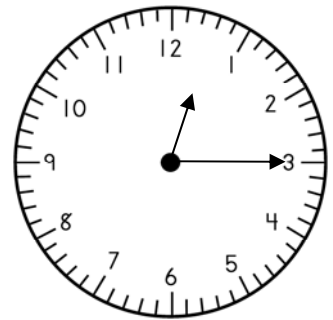
- Draw an array to show this problem.
- Write the answer to the problem.

$$2 + 2 + 2 + 2 + 2 = \underline{\quad}$$

- Mark the number for the expanded form $500 + 7$.

- 57
- 507
- 570

What is the time?





- How much?

$$\begin{array}{r} 227 \\ + 385 \\ \hline \end{array}$$

$$\begin{array}{r} 67 \\ + 56 \\ \hline \end{array}$$

$$\begin{array}{r} 73 \\ + 18 \\ \hline \end{array}$$

$$\begin{array}{r} 8 \\ - 3 \\ \hline \end{array}$$

$$\begin{array}{r} 94 \\ - 65 \\ \hline \end{array}$$

$$\begin{array}{r} 345 \\ - 218 \\ \hline \end{array}$$

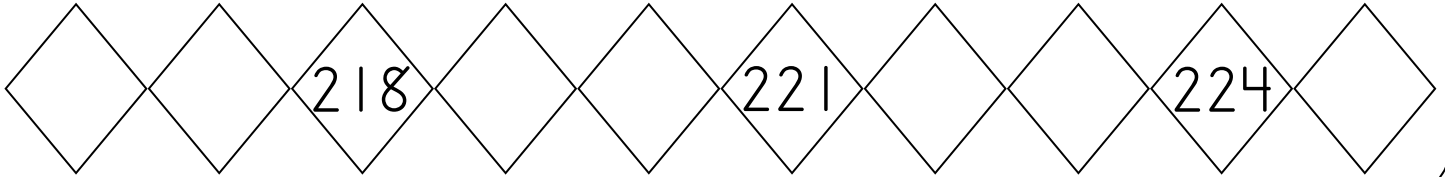
Name: _____

Score: _____

Math Homework

Today is: _____

Write the missing numbers. Color the number that comes after 219 yellow.



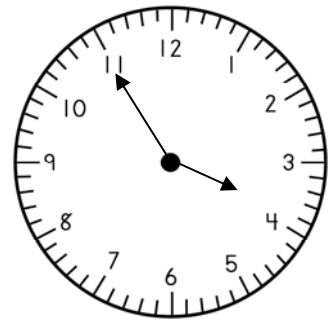
- Draw an array to show this problem.
- Write the answer to the problem.

$$3 + 3 + 3 + 3 + 3 = \underline{\hspace{2cm}}$$

- Mark the number for the expanded form $300 + 30 + 7$.

- 373
- 733
- 337

What is the time?





- How much?

$$\begin{array}{r} 376 \\ + 358 \\ \hline \end{array}$$

$$\begin{array}{r} 94 \\ + 65 \\ \hline \end{array}$$

$$\begin{array}{r} 88 \\ + 15 \\ \hline \end{array}$$

$$\begin{array}{r} 6 \\ - 3 \\ \hline \end{array}$$

$$\begin{array}{r} 84 \\ - 71 \\ \hline \end{array}$$

$$\begin{array}{r} 237 \\ - 119 \\ \hline \end{array}$$