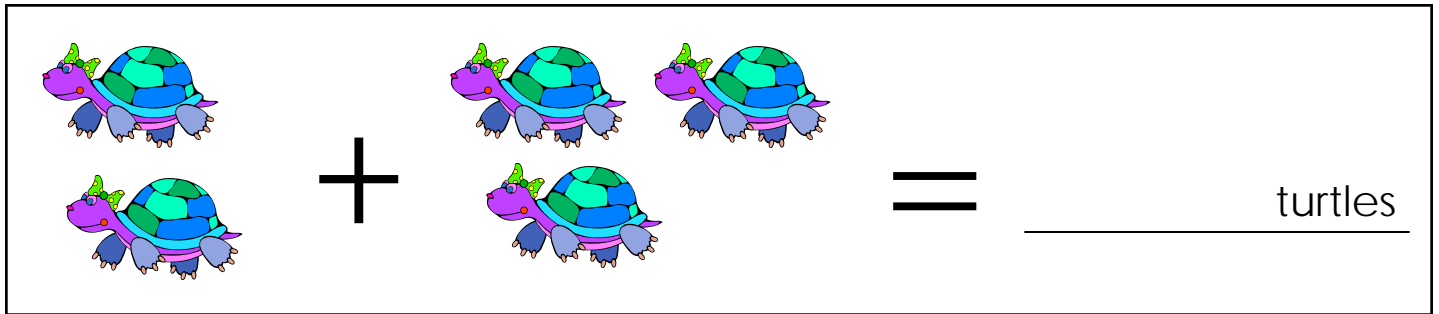


Name: _____


Score: _____

I Can Add!




1 + 3 = _____ turtles

A visual addition problem showing 1 turtle plus 3 turtles. The turtles are colorful with green, blue, and purple shells and purple heads. A plus sign is between the groups, and an equals sign is followed by a blank line and the word 'turtles'.



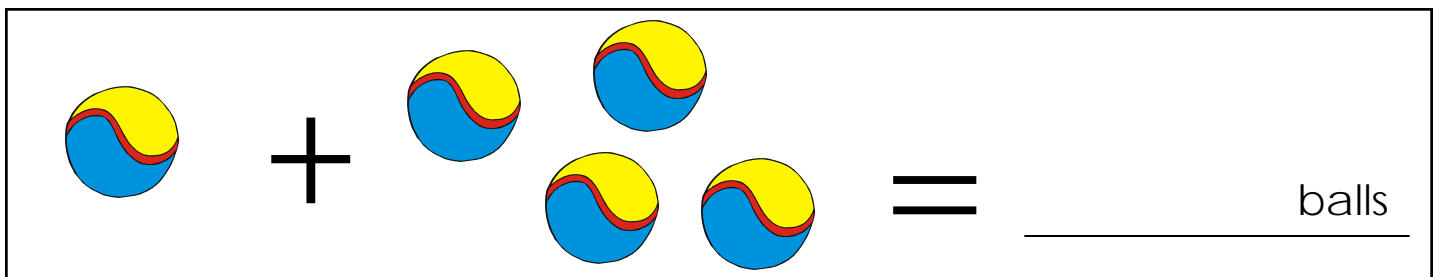
1 + 2 = _____ bugs

A visual addition problem showing 1 bug plus 2 bugs. The bugs are blue with yellow and red stripes on their bodies and antennae. A plus sign is between the groups, and an equals sign is followed by a blank line and the word 'bugs'.




2 + 1 = _____ dogs

A visual addition problem showing 2 dogs plus 1 dog. The dogs are brown and white with black spots. A plus sign is between the groups, and an equals sign is followed by a blank line and the word 'dogs'.




1 + 4 = _____ balls

A visual addition problem showing 1 ball plus 4 balls. The balls are blue and yellow with a red stripe. A plus sign is between the groups, and an equals sign is followed by a blank line and the word 'balls'.




2 + 1 = _____ balloons

A visual addition problem showing 2 balloons plus 1 balloon. The balloons are purple with a smiley face. A plus sign is between the groups, and an equals sign is followed by a blank line and the word 'balloons'.



+



=

_____ bears




+



=

_____ penguins



+



=

_____ planes





+




=

_____ bunnies



+



=

_____ fish