

Name: _____

Score: _____

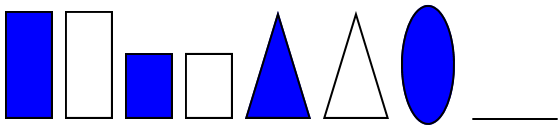
Morning Math

Today is: _____

2 weeks ago it was: _____

In 6 days it will be: _____

What comes next?



How many days are in four weeks?

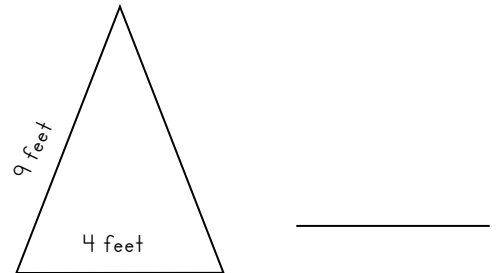

Please solve:



$$\begin{array}{r} - 85 \\ \hline 212 \end{array}$$

$$\begin{array}{r} + 65 \\ \hline 143 \end{array}$$

Please find the perimeter of each object:



Please write \$137.82 in words:

$$\begin{array}{r} \$ 56.80 \\ - 39.97 \\ \hline \end{array}$$

$$\begin{array}{r} 37 \\ 53 \\ 44 \\ 56 \\ 28 \\ + 19 \\ \hline \end{array}$$

$$\begin{array}{r} 434 \\ 156 \\ 204 \\ + 212 \\ \hline \end{array}$$

$$\begin{array}{r} 613 \\ \times 5 \\ \hline \end{array}$$

$$8 \overline{)77}$$

Name: _____

Score: _____

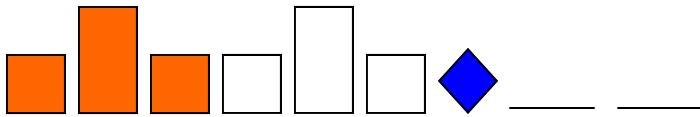
Homework Math

Today is: _____

In 8 days it will be: _____

3 weeks ago it was: _____

What comes next?



Write two thousand six hundred two in digits.

Please solve:

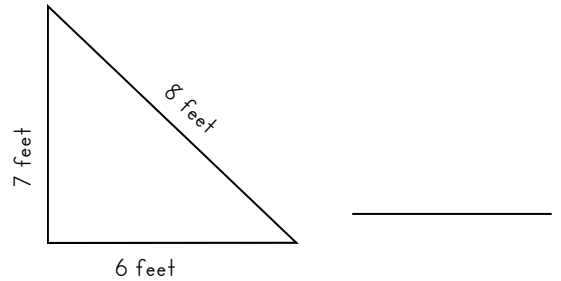
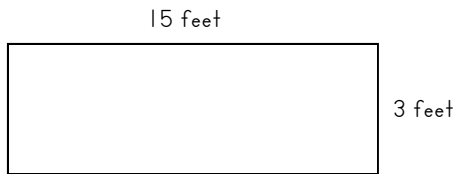


$$\begin{array}{r} - 64 \\ \hline 97 \end{array}$$



$$\begin{array}{r} + 39 \\ \hline 140 \end{array}$$

Please find the perimeter of each object:



Please write \$53.29 in words:

$$\begin{array}{r} \$ 70.26 \\ + 27.48 \\ \hline \end{array}$$

$$\begin{array}{r} 33 \\ 54 \\ 57 \\ 88 \\ 32 \\ + 26 \\ \hline \end{array}$$

$$\begin{array}{r} 448 \\ 128 \\ 343 \\ + 247 \\ \hline \end{array}$$

$$\begin{array}{r} 238 \\ \times 4 \\ \hline \end{array}$$

$$6 \overline{)41}$$