



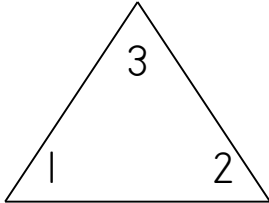
Name: _____

Score: _____

Math Fact Families

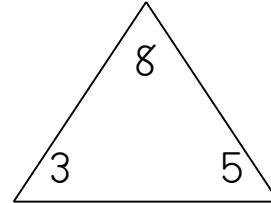
Complete each family of facts.

1.



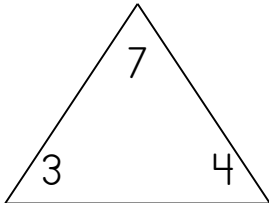
<input type="text"/>	+	<input type="text"/>	=	<input type="text"/>
<input type="text"/>	+	<input type="text"/>	=	<input type="text"/>
<input type="text"/>	-	<input type="text"/>	=	<input type="text"/>
<input type="text"/>	-	<input type="text"/>	=	<input type="text"/>

2.



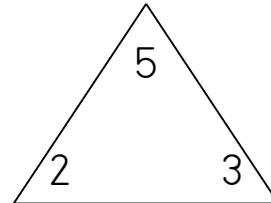
<input type="text"/>	+	<input type="text"/>	=	<input type="text"/>
<input type="text"/>	+	<input type="text"/>	=	<input type="text"/>
<input type="text"/>	-	<input type="text"/>	=	<input type="text"/>
<input type="text"/>	-	<input type="text"/>	=	<input type="text"/>

3.



<input type="text"/>	+	<input type="text"/>	=	<input type="text"/>
<input type="text"/>	+	<input type="text"/>	=	<input type="text"/>
<input type="text"/>	-	<input type="text"/>	=	<input type="text"/>
<input type="text"/>	-	<input type="text"/>	=	<input type="text"/>

4.



<input type="text"/>	+	<input type="text"/>	=	<input type="text"/>
<input type="text"/>	+	<input type="text"/>	=	<input type="text"/>
<input type="text"/>	-	<input type="text"/>	=	<input type="text"/>
<input type="text"/>	-	<input type="text"/>	=	<input type="text"/>



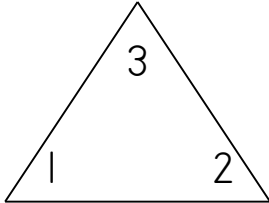
Name: _____

Score: _____

Math Fact Families

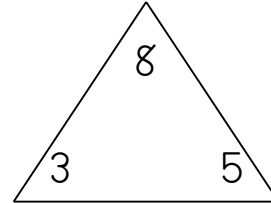
Complete each family of facts.

1.



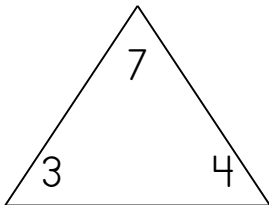
$$\begin{array}{r} \boxed{1} + \boxed{2} = \boxed{3} \\ \boxed{2} + \boxed{1} = \boxed{3} \\ \boxed{3} - \boxed{1} = \boxed{2} \\ \boxed{3} - \boxed{2} = \boxed{1} \end{array}$$

2.



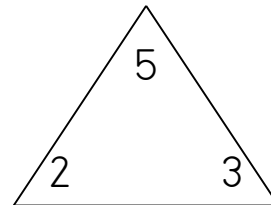
$$\begin{array}{r} \boxed{3} + \boxed{5} = \boxed{8} \\ \boxed{5} + \boxed{3} = \boxed{8} \\ \boxed{8} - \boxed{3} = \boxed{5} \\ \boxed{8} - \boxed{5} = \boxed{3} \end{array}$$

3.



$$\begin{array}{r} \boxed{3} + \boxed{4} = \boxed{7} \\ \boxed{4} + \boxed{3} = \boxed{7} \\ \boxed{7} - \boxed{3} = \boxed{4} \\ \boxed{7} - \boxed{4} = \boxed{3} \end{array}$$

4.



$$\begin{array}{r} \boxed{2} + \boxed{3} = \boxed{5} \\ \boxed{3} + \boxed{2} = \boxed{5} \\ \boxed{5} - \boxed{2} = \boxed{3} \\ \boxed{5} - \boxed{3} = \boxed{2} \end{array}$$