


Name: \_\_\_\_\_

Score: \_\_\_\_\_

### Morning Math

Today is: \_\_\_\_\_

What fraction part is black?  
Write the fraction on the line.



\_\_\_\_\_

Color to show  $\frac{3}{9}$ .  $\frac{3}{9} = \frac{1}{3}$



- Round to the nearest ten.

$$853 = \underline{\quad}$$

Use  $>$ ,  $<$ , or  $=$

$$36 \div 6 \bigcirc 54 \div 9$$

- Round to the nearest hundred.

$$431 = \underline{\quad}$$

Find the missing number.

$$\boxed{\quad} - 218 = 275$$

Farmer Green has 97 horses, 88 pigs, 3 donkeys, 12 goats, 69 cows, 26 ducks and 216 chickens on his farm.

How many 4-legged animals are on Farmer Green's farm?

Write and solve the problem.

What information is not necessary to solve this problem?

$$\begin{array}{r} 60 \\ \times 5 \\ \hline \end{array}$$

$$\begin{array}{r} 50 \\ \times 2 \\ \hline \end{array}$$

$$\begin{array}{r} 40 \\ \times 3 \\ \hline \end{array}$$

$$\begin{array}{r} 9 \\ \times 4 \\ \hline \end{array}$$

$$\begin{array}{r} 3 \\ \times 5 \\ \hline \end{array}$$

$$\begin{array}{r} 7 \\ \times 2 \\ \hline \end{array}$$

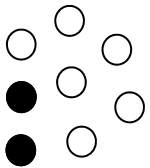
Name: \_\_\_\_\_

Score: \_\_\_\_\_

### Math Homework

Today is: \_\_\_\_\_

What fraction part is black?  
Write the fraction on the line.



Color to show  $\frac{6}{9}$ .  $\frac{6}{9} = \frac{2}{3}$



- Round to the nearest ten.

$$429 = \underline{\quad}$$

Use  $>$ ,  $<$ , or  $=$

$$32 \div 8 \bigcirc 27 \div 9$$

- Round to the nearest hundred.

$$672 = \underline{\quad}$$

Find the missing number.

$$\boxed{\quad} - 432 = 187$$

Farmer Joe has 28 chickens, 43 geese, 12 ducks, 18 cows, 5 horses, and 7 pigs on his farm.

How many 2-legged animals are on Farmer Joe's farm?

Write and solve the problem.

What information is not necessary to solve this problem?

\_\_\_\_\_

$$\begin{array}{r} 30 \\ \times 4 \\ \hline \end{array}$$

$$\begin{array}{r} 70 \\ \times 2 \\ \hline \end{array}$$

$$\begin{array}{r} 20 \\ \times 6 \\ \hline \end{array}$$

$$\begin{array}{r} 6 \\ \times 7 \\ \hline \end{array}$$

$$\begin{array}{r} 2 \\ \times 8 \\ \hline \end{array}$$

$$\begin{array}{r} 9 \\ \times 3 \\ \hline \end{array}$$

Name: \_\_\_\_\_

Score: \_\_\_\_\_

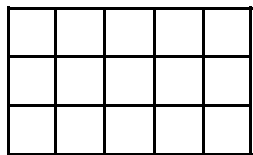
### Morning Math

Today is: \_\_\_\_\_

- Write the numbers from 741 to 750. Color the number that is four more than 742 blue.

--	--	--	--	--	--	--	--	--	--

What is the area in square feet?



\_\_\_\_\_

Write the missing factors.

$$\begin{array}{r} \square \\ \times 3 \\ \hline 21 \end{array}$$

$$\begin{array}{r} \square \\ \times 5 \\ \hline 35 \end{array}$$

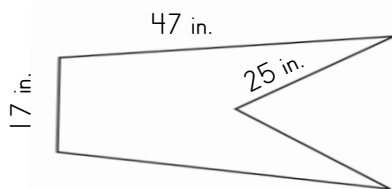
$$\begin{array}{r} \square \\ \times 2 \\ \hline 16 \end{array}$$

Write the multiplication and division math fact problems for 4, 8, 32.

\_\_\_\_\_  
\_\_\_\_\_

\_\_\_\_\_  
\_\_\_\_\_

What is the perimeter?



The perimeter is \_\_\_\_\_.

$$8 \overline{)64} \quad 3 \overline{)12}$$

$$\begin{array}{r} 5 \\ \times 5 \\ \hline \end{array}$$

$$\begin{array}{r} 9 \\ \times 9 \\ \hline \end{array}$$

$$\begin{array}{r} 685 \\ + 255 \\ \hline \end{array}$$

$$\begin{array}{r} 318 \\ - 125 \\ \hline \end{array}$$

Name: \_\_\_\_\_

Score: \_\_\_\_\_

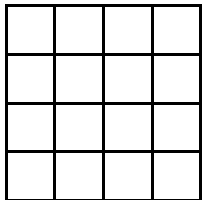
### Math Homework

Today is: \_\_\_\_\_

- Write the numbers from 741 to 750. Color the number that is three less than 748 blue.

--	--	--	--	--	--	--	--	--	--

What is the area in square feet?



\_\_\_\_\_

Write the missing factors.

$$\begin{array}{r} \square \\ \times 4 \\ \hline 20 \end{array}$$

$$\begin{array}{r} \square \\ \times 6 \\ \hline 18 \end{array}$$

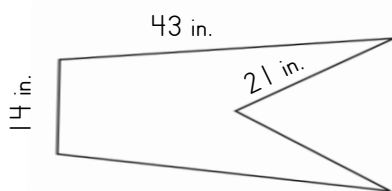
$$\begin{array}{r} \square \\ \times 4 \\ \hline 32 \end{array}$$

Write the multiplication and division math fact problems for 5, 6, 30.

\_\_\_\_\_  
\_\_\_\_\_

\_\_\_\_\_  
\_\_\_\_\_

What is the perimeter?



The perimeter is \_\_\_\_\_.

$$7 \overline{)49} \quad 6 \overline{)36}$$

$$\begin{array}{r} 4 \\ \times 4 \\ \hline \end{array}$$

$$\begin{array}{r} 8 \\ \times 8 \\ \hline \end{array}$$

$$\begin{array}{r} 834 \\ + 375 \\ \hline \end{array}$$

$$\begin{array}{r} 612 \\ - 441 \\ \hline \end{array}$$

Name: \_\_\_\_\_

Score: \_\_\_\_\_

### Morning Math

Today is: \_\_\_\_\_

Write the missing numbers.

			715				719		
--	--	--	-----	--	--	--	-----	--	--

• How much?



• Mark the larger fraction.

$\frac{3}{8}$

$\frac{3}{7}$

Color to show  $\frac{7}{9}$ .


• Round each number to the nearest hundred.

$490 = \underline{\hspace{2cm}}$        $614 = \underline{\hspace{2cm}}$

$\begin{array}{r} 60 \\ \times 5 \\ \hline \end{array}$	$\begin{array}{r} 40 \\ \times 2 \\ \hline \end{array}$	$\begin{array}{r} 9 \\ \times 9 \\ \hline \end{array}$	$\begin{array}{r} 7 \\ \times 7 \\ \hline \end{array}$	$\begin{array}{r} 3 \\ \times 3 \\ \hline \end{array}$	$\begin{array}{r} 5 \\ \times 5 \\ \hline \end{array}$
---	---	--	--	--	--

Name: \_\_\_\_\_

Score: \_\_\_\_\_

### Math Homework

Today is: \_\_\_\_\_

Write the missing numbers.

	703						709		
--	-----	--	--	--	--	--	-----	--	--

• How much?



• Mark the larger fraction.


$\frac{5}{6}$



$\frac{5}{7}$



Color to show  $\frac{4}{9}$ .



• Round each number to the nearest hundred.

$659 = \underline{\hspace{2cm}}$

$238 = \underline{\hspace{2cm}}$

$$\begin{array}{r} 30 \\ \times 6 \\ \hline \end{array}$$

$$\begin{array}{r} 70 \\ \times 3 \\ \hline \end{array}$$

$$\begin{array}{r} 6 \\ \times 6 \\ \hline \end{array}$$

$$\begin{array}{r} 4 \\ \times 4 \\ \hline \end{array}$$

$$\begin{array}{r} 8 \\ \times 8 \\ \hline \end{array}$$

$$\begin{array}{r} 2 \\ \times 2 \\ \hline \end{array}$$


Name: \_\_\_\_\_

Score: \_\_\_\_\_

### Morning Math

Today is: \_\_\_\_\_

What fraction part is black?  
Write the fraction on the line.



Color to show  $\frac{4}{6}$ .  $\frac{4}{6} = \frac{2}{3}$



- Round to the nearest ten.

$$748 = \underline{\hspace{2cm}}$$

Use  $>$ , or  $<$

$$\frac{3}{4} \bigcirc \frac{3}{5} \quad \frac{2}{5} \bigcirc \frac{2}{4}$$

- Round to the nearest hundred.

$$992 = \underline{\hspace{2cm}}$$

Find the missing number.

$$\boxed{\hspace{2cm}} + 385 = 521$$

The store sold 66 bags of cheese popcorn, 139 bags of buttered popcorn, 35 bags of plain popcorn, and 22 boxes of popsicles on Tuesday.  
How many bags of popcorn were sold altogether?  
Write and solve the problem.  
What information is not necessary to solve this problem?

\_\_\_\_\_

$$\begin{array}{r} 80 \\ \times 4 \\ \hline \end{array}$$

$$\begin{array}{r} 10 \\ \times 9 \\ \hline \end{array}$$

$$\begin{array}{r} 30 \\ \times 6 \\ \hline \end{array}$$

$$\begin{array}{r} 7 \\ \times 2 \\ \hline \end{array}$$

$$\begin{array}{r} 9 \\ \times 5 \\ \hline \end{array}$$

$$\begin{array}{r} 4 \\ \times 9 \\ \hline \end{array}$$


Name: \_\_\_\_\_

Score: \_\_\_\_\_

### Math Homework

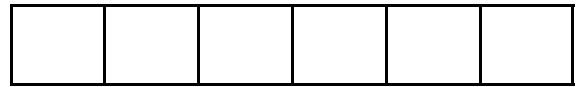
Today is: \_\_\_\_\_

What fraction part is black?  
Write the fraction on the line.



\_\_\_\_\_

Color to show  $\frac{2}{6}$ .  $\frac{2}{6} = \frac{1}{3}$



- Round to the nearest ten.

$$274 = \underline{\hspace{2cm}}$$

Use  $>$ , or  $<$

$$\frac{2}{3} \bigcirc \frac{2}{5} \quad \frac{1}{3} \bigcirc \frac{1}{2}$$

- Round to the nearest hundred.

$$384 = \underline{\hspace{2cm}}$$

Find the missing number.

$$\boxed{\hspace{2cm}} + 439 = 703$$

The store sold 98 popsicles, 120 ice cream bars, 39 frozen fruit bars, and 218 bags of chips on Monday.

How many frozen items did the store sell in all?

Write and solve the problem.

What information is not necessary to solve this problem?

\_\_\_\_\_

$$\begin{array}{r} 70 \\ \times 5 \\ \hline \end{array}$$

$$\begin{array}{r} 30 \\ \times 8 \\ \hline \end{array}$$

$$\begin{array}{r} 50 \\ \times 3 \\ \hline \end{array}$$

$$\begin{array}{r} 9 \\ \times 3 \\ \hline \end{array}$$

$$\begin{array}{r} 6 \\ \times 2 \\ \hline \end{array}$$

$$\begin{array}{r} 8 \\ \times 6 \\ \hline \end{array}$$



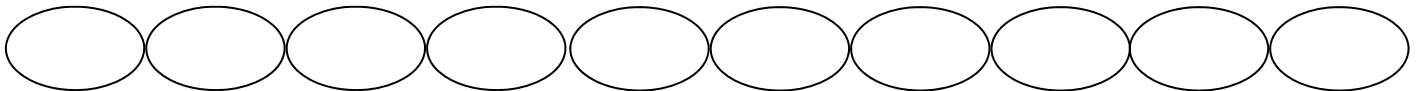
Name: \_\_\_\_\_

Score: \_\_\_\_\_

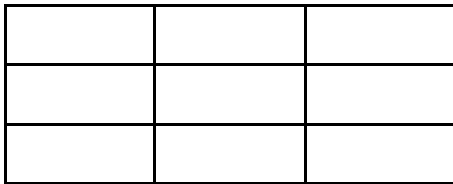
### Morning Math Test

Today is: \_\_\_\_\_

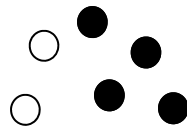
Skip count by 10, starting at 550. Color the number that is 30 more than 580 blue.



Label each fractional part.

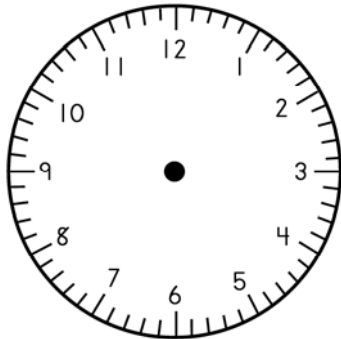


What fraction part is black?  
Write the fraction on the line.



\_\_\_\_\_

Draw the hands on the clock. It is night.



9 : 54

- Look at the clock.
- What was the time 2 hours ago?

\_\_\_\_\_

- Look at the clock.
- What will the time be in 4 hours?

\_\_\_\_\_

$$\begin{array}{r} 159 \\ 213 \\ 145 \\ + 322 \\ \hline \end{array}$$

$$9 \overline{)36}$$

$$2 \overline{)18}$$

$$4 \overline{)20}$$

$$6 \overline{)48}$$

$$3 \overline{)21}$$

$$8 \overline{)24}$$

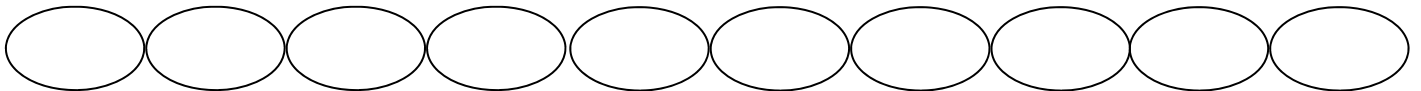
Name: \_\_\_\_\_

Score: \_\_\_\_\_


### Math Homework

Today is: \_\_\_\_\_

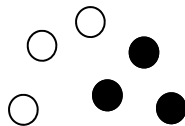
Skip count by 10, starting at 630. Color the number that is 20 less than 690 blue.



Label each fractional part.

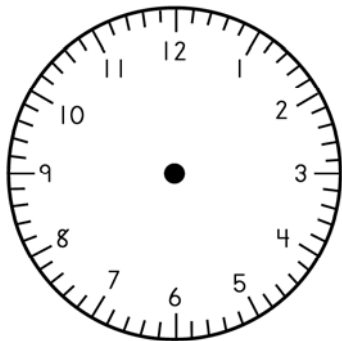


What fraction part is black?  
Write the fraction on the line.



\_\_\_\_\_

Draw the hands on the clock. It is afternoon.



2 : 12

- Look at the clock.
- What was the time 3 hours ago?

\_\_\_\_\_

- Look at the clock.
- What will the time be in 3 hours?

\_\_\_\_\_

$$\begin{array}{r} 225 \\ 125 \\ 205 \\ + 335 \\ \hline \end{array}$$

$$2 \overline{)16}$$

$$9 \overline{)81}$$

$$5 \overline{)35}$$

$$4 \overline{)28}$$

$$6 \overline{)54}$$

$$7 \overline{)21}$$