


Name: \_\_\_\_\_  
-----  
\_\_\_\_\_

Day: \_\_\_\_\_  
-----  
\_\_\_\_\_

Reading:

Which picture begins with the letter C?



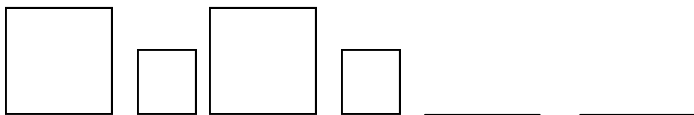
Sentences: Write a sentence about this picture.



Math: Please write the missing numbers.

0, \_\_\_\_\_, 2, 3, \_\_\_\_\_, 5, 6, 7, \_\_\_\_\_, 9, \_\_\_\_\_

Please continue the pattern.



Is it odd or even? Circle one:

2      odd      even

$4 + 5 = \underline{\quad}$


$3 - 2 = \underline{\quad}$

Name: \_\_\_\_\_  
-----  
\_\_\_\_\_

Day: \_\_\_\_\_  
-----  
\_\_\_\_\_

Matching:

ride  
slide  
bride



\_\_\_\_\_  
-----  
\_\_\_\_\_

Sentences: Write a sentence about this picture.



\_\_\_\_\_  
-----  
\_\_\_\_\_

\_\_\_\_\_  
-----  
\_\_\_\_\_

Math: Write the numbers from 51 to 60. Color the **even** numbers blue.

--	--	--	--	--	--	--	--	--	--

$4 - 0 = \underline{\quad}$

$6 - 2 = \underline{\quad}$

$8 + 6 = \underline{\quad}$

$3 + 8 = \underline{\quad}$

Name: \_\_\_\_\_

Day: \_\_\_\_\_

**Phonics:**

Please mark the vowel sound you hear for the word in the picture.



**Sentences:** Write a sentence about this picture.



\_\_\_\_\_

\_\_\_\_\_

\_\_\_\_\_

**Math:**


- Draw 7 apples.
- Draw an X through 3 apples.
- How many apples are left?

$$7 - 3 = \underline{\quad}$$

$$5 + 5 = \underline{\quad}$$

$$2 + 4 = \underline{\quad}$$

How many more birds than carrots?



I see \_\_\_\_\_ more birds than carrots.

Name: \_\_\_\_\_  
-----  
\_\_\_\_\_

Day: \_\_\_\_\_  
-----  
\_\_\_\_\_

ABC Order: Write the letter that comes next:

l, m, n, \_\_\_\_\_

b, c, d, \_\_\_\_\_

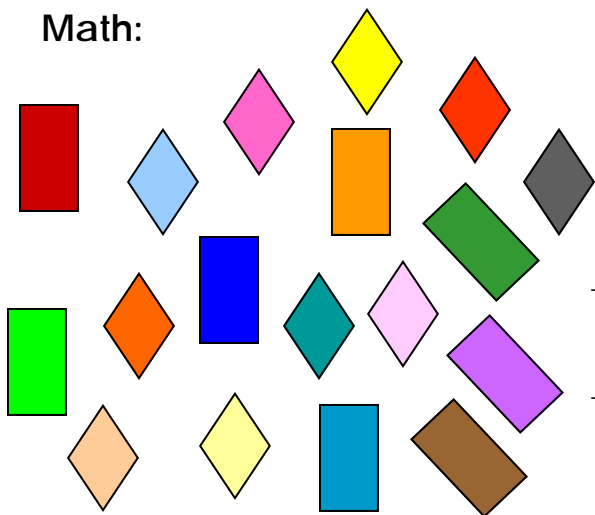
Sentences: Write a sentence about this picture.



\_\_\_\_\_  
-----  
\_\_\_\_\_

\_\_\_\_\_  
-----  
\_\_\_\_\_

Math:



How many diamonds do you see? \_\_\_\_\_

How many rectangles do you see? \_\_\_\_\_

There are \_\_\_\_\_ diamonds and rectangles in all.

There are **more** \_\_\_\_\_  
than \_\_\_\_\_.

$$9 + 5 = \underline{\quad}$$

$$8 - 2 = \underline{\quad}$$

Name: \_\_\_\_\_  
-----  
\_\_\_\_\_

Day: \_\_\_\_\_  
-----  
\_\_\_\_\_

Reading:

Which picture begins with the letter H?



Sentences: Write a sentence about this picture.



\_\_\_\_\_  
-----  
\_\_\_\_\_

\_\_\_\_\_  
-----  
\_\_\_\_\_

Math: Please write the missing numbers.

0, \_\_\_\_\_, \_\_\_\_\_, 3, \_\_\_\_\_, 5, \_\_\_\_\_, 7, \_\_\_\_\_, 9, \_\_\_\_\_

Please continue the pattern.



Is it odd or even? Circle one:

4      odd      even

$9 + 2 = \underline{\quad}$

$4 - 1 = \underline{\quad}$