

Name: _____

Score: _____

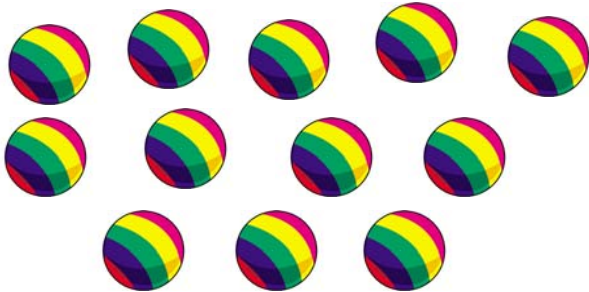
Morning Math

Today is: _____

Count by 10, beginning with 50. Color the number 90 blue.

--	--	--	--	--	--	--	--	--	--

There are 36 more balls in a box in the stockroom.
Write and solve the problem.



How many balls are there in all?

Find the missing numbers.

$$12 - \square = 7$$

$$\square - 6 = 8$$

- Write the number that is 100 more than 325. _____

- There are 78 birds in the zoo cage.
- 45 birds are red.
- 12 birds are blue.
- How many of the birds are not red or blue?
- Please write and solve this problem.

$$\begin{array}{r} 428 \\ + 158 \\ \hline \end{array} \quad \begin{array}{r} 67 \\ + 45 \\ \hline \end{array} \quad \begin{array}{r} 7 \\ + 4 \\ \hline \end{array}$$

$$\begin{array}{r} 5 \\ - 1 \\ \hline \end{array} \quad \begin{array}{r} 12 \\ - 3 \\ \hline \end{array} \quad \begin{array}{r} 70 \\ - 55 \\ \hline \end{array}$$

Name: _____

Score: _____

Math Homework

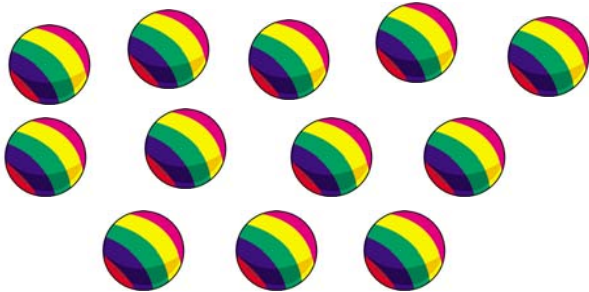
Today is: _____

Count by 10, beginning with 40. Color the number 70 blue.

--	--	--	--	--	--	--	--	--	--

There are 28 more balls in a box in the stockroom.

Write and solve the problem.



How many balls are there in all?

Find the missing numbers.

$$13 - \square = 5$$

$$\square - 8 = 4$$

- Write the number that is 100 more than 273. _____

- There are 96 birds in the zoo cage.
- 23 birds are red.
- 15 birds are blue.
- How many of the birds are not red or blue?
- Please write and solve this problem.

$$\begin{array}{r} 555 \\ + 207 \\ \hline \end{array} \quad \begin{array}{r} 65 \\ + 32 \\ \hline \end{array} \quad \begin{array}{r} 9 \\ + 5 \\ \hline \end{array}$$

$$\begin{array}{r} 8 \\ - 3 \\ \hline \end{array} \quad \begin{array}{r} 16 \\ - 8 \\ \hline \end{array} \quad \begin{array}{r} 74 \\ - 38 \\ \hline \end{array}$$

Name: _____

Score: _____

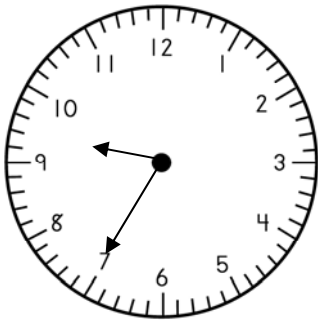
Morning Math

Today is: _____

Write the numbers from 261 to 270. Color the number that is two more than 267 yellow.

--	--	--	--	--	--	--	--	--	--

What is the time?



	•
	•



• How much?

Mark the number that has a 5 in the hundreds' place.

- 568
- 856
- 685

Please answer each question.

- How many people like carrots best?

- Which vegetable is liked the most?

Favorite Vegetables

beans	●	●	●	●	●	●			
corn	●	●	●	●	●	●	●	●	●
carrots	●	●	●	●					

•● = 5 vegetables

$$\begin{array}{r} 672 \\ + 129 \\ \hline \end{array} \quad 9 + 8 = \underline{\quad}$$

$$\begin{array}{r} 4 \\ - 2 \\ \hline \end{array} \quad 10 - 6 = \underline{\quad}$$

Name: _____

Score: _____

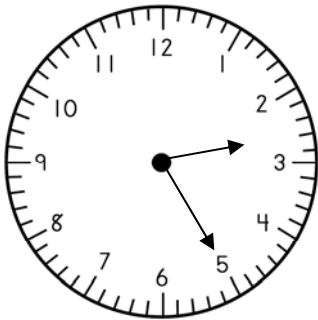
Math Homework

Today is: _____

Write the numbers from 261 to 270. Color the number that is two less than 265 yellow.

--	--	--	--	--	--	--	--	--	--

What is the time?



	•	•	
--	---	---	--



• How much?

Mark the number that has a 6 in the ones' place.

- 568
- 856
- 685

Please answer each question.

- How many people like corn best?

- Which vegetable is liked the least?

Favorite Vegetables

beans	●	●	●	●	●	●	●	●	
corn	●	●	●	●	●	●	●		
carrots	●	●	●						

● = 5 vegetables

$$\begin{array}{r} 336 \\ + 258 \\ \hline \end{array} \quad 6 + 5 = \underline{\quad}$$

$$\begin{array}{r} 8 \\ - 2 \\ \hline \end{array} \quad 12 - 7 = \underline{\quad}$$

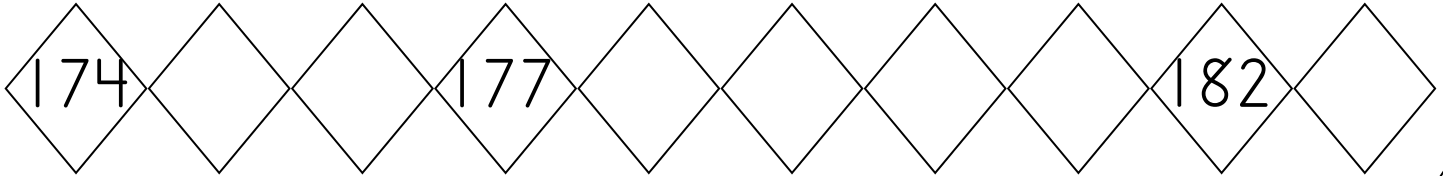
Name: _____

Score: _____

Morning Math

Today is: _____

Write the missing numbers. Color the number that is two less than 181 orange.



Write the number that is in the hundreds' place.

673 _____

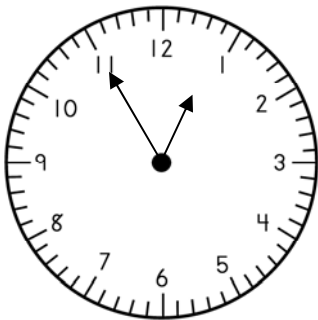
Write the number that is in the tens' place.

138 _____

Use $>$, $<$, or $=$

345 ○ 287

I just ate lunch.



What is the time?

- It is:
 a.m.
 p.m.

•
•

- Draw to show 68 cents, using the highest values of these coins: quarters, nickels, dimes, and pennies.

$$\begin{array}{r} 444 \\ + 167 \\ \hline \end{array} \quad \begin{array}{r} 53 \\ + 26 \\ \hline \end{array} \quad \begin{array}{r} 9 \\ + 2 \\ \hline \end{array}$$

$$\begin{array}{r} 6 \\ - 5 \\ \hline \end{array} \quad \begin{array}{r} 12 \\ - 9 \\ \hline \end{array} \quad \begin{array}{r} 73 \\ - 57 \\ \hline \end{array}$$

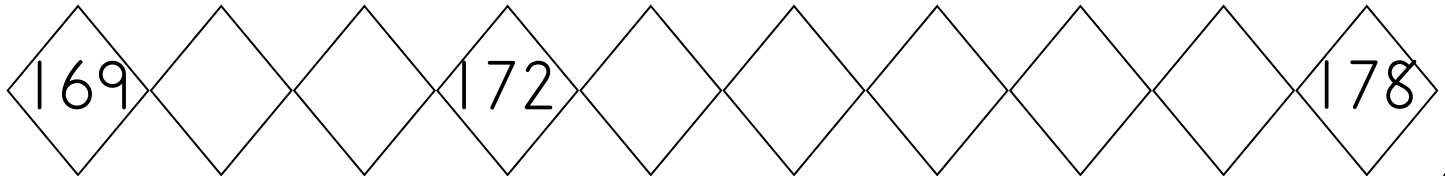
Name: _____

Score: _____

Math Homework

Today is: _____

Write the missing numbers. Color the number that is two more than 173 orange.



Write the number that is in the ones' place.

714 _____

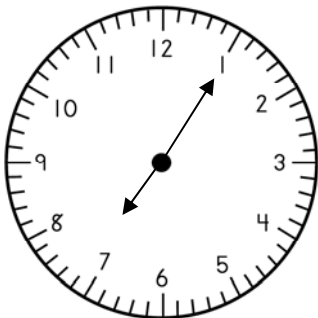
Write the number that is in the hundreds' place.

523 _____

Use $>$, $<$, or $=$

299 ○ 304

I just got up for school.



What is the time?

- It is:
 - a.m.
 - p.m.

•

- Draw to show 57 cents, using the highest values of these coins: quarters, nickels, dimes, and pennies.

$$\begin{array}{r} 265 \\ + 318 \\ \hline \end{array}$$
$$\begin{array}{r} 82 \\ + 16 \\ \hline \end{array}$$
$$\begin{array}{r} 7 \\ + 3 \\ \hline \end{array}$$

$$\begin{array}{r} 9 \\ - 1 \\ \hline \end{array}$$
$$\begin{array}{r} 11 \\ - 5 \\ \hline \end{array}$$
$$\begin{array}{r} 82 \\ - 66 \\ \hline \end{array}$$

Name: _____

Score: _____

Morning Math

Today is: _____

Write the numbers from 271 to 280. Color the number that comes after 273 blue.

○ ○ ○ ○ ○ ○ ○ ○ ○ ○

Mark the fraction.



$\frac{1}{2}$

$\frac{1}{4}$

$\frac{1}{3}$

Write the number that comes before.

_____, 220

- Draw to show 91 cents, using the highest values of these coins: quarters, dimes, nickels, and pennies.

- How much?



$$\begin{array}{r} 484 \\ + 265 \\ \hline \end{array}$$

$$\begin{array}{r} 83 \\ + 20 \\ \hline \end{array}$$

$$\begin{array}{r} 43 \\ + 35 \\ \hline \end{array}$$

$$\begin{array}{r} 7 \\ - 1 \\ \hline \end{array}$$

$$\begin{array}{r} 84 \\ - 55 \\ \hline \end{array}$$

$$\begin{array}{r} 80 \\ - 60 \\ \hline \end{array}$$

Name: _____

Score: _____

Math Homework

Today is: _____

Write the numbers from 271 to 280. Color the number that comes before 277 yellow.

--	--	--	--	--	--	--	--	--	--

Mark the fraction.



$\frac{1}{2}$

$\frac{1}{4}$

$\frac{1}{3}$

Write the number that comes before.

_____, 200

- Draw to show 73 cents, using the highest values of these coins: quarters, dimes, nickels, and pennies.

- How much?



$\begin{array}{r} 337 \\ + 289 \\ \hline \end{array}$	$\begin{array}{r} 65 \\ + 35 \\ \hline \end{array}$	$\begin{array}{r} 29 \\ + 43 \\ \hline \end{array}$
---	---	---

$\begin{array}{r} 8 \\ - 5 \\ \hline \end{array}$	$\begin{array}{r} 77 \\ - 54 \\ \hline \end{array}$	$\begin{array}{r} 85 \\ - 38 \\ \hline \end{array}$
---	---	---

Name: _____

Score: _____

Morning Math Test

Today is: _____

Write the numbers from 271 to 280. Color the number that is 5 more than 272 blue.

--	--	--	--	--	--	--	--	--	--

- Draw an array to show this problem.
- Write the answer to the problem.

$$5 + 5 + 5 + 5 = \underline{\quad}$$

- Write the number that is 100 more than 346. _____

- The number 5 is:

odd even

- There are 66 cars in the parking lot.
- 33 cars are white.
- 18 cars are blue.
- How many of the cars are not white or blue?
- Write and solve this problem.

$$35 + 29 = \underline{\quad}$$

$$6 + 6 = \underline{\quad}$$

$$70 - 18 = \underline{\quad}$$

$$12 - 5 = \underline{\quad}$$

Name: _____

Score: _____

Math Homework

Today is: _____

Write the numbers from 271 to 280. Color the number that is 5 less than 277 orange.

--	--	--	--	--	--	--	--	--	--

- Draw an array to show this problem.
- Write the answer to the problem.

$$3 + 3 + 3 = \underline{\quad}$$

- Write the number that is 100 more than 295. _____

- The number 4 is:

odd even

- There are 75 cars in the parking lot.
- 15 cars are blue.
- 18 cars are red.
- How many of the cars are not red or blue?
- Write and solve this problem.

$$45 + 25 = \underline{\quad}$$

$$6 + 7 = \underline{\quad}$$

$$42 - 17 = \underline{\quad}$$

$$12 - 8 = \underline{\quad}$$