

Name: \_\_\_\_\_

Score: \_\_\_\_\_

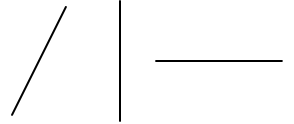
### Daily Work

Today is: \_\_\_\_\_

Look at the current calendar and answer the following questions:

- Last month was: \_\_\_\_\_
- In two months it will be: \_\_\_\_\_

Circle the oblique line.



• Write the fraction for the shaded parts.




\_\_\_\_\_



\_\_\_\_\_

• Divide this square into six equal parts.

• Shade one-sixth.



April									
May									
June									

Use the graph to answer these questions:

- How many apples were eaten in April? \_\_\_\_\_
- How many apples were eaten in May? \_\_\_\_\_
- How many apples were eaten in June? \_\_\_\_\_
- How many total apples were eaten? \_\_\_\_\_

= 2 apples

Answer the question in a complete sentence answer, by using part of the question in your answer.

How old will you be on your next birthday?

---



---



---



---



---



---

Circle the adjectives (describing words) in this sentence.

The happy young girl walked to the giant oak tree.

Circle the subject in this sentence.

In about four days, Julian will move to Kentucky.

Name: \_\_\_\_\_

Score: \_\_\_\_\_

### Daily Work

Today is: \_\_\_\_\_

There are 153 children on the bus.  
68 of the children are boys.  
How many are girls?  
Please show your work.

\_\_\_\_\_ of the children are girls.

What comes next?

407 \_\_\_\_\_

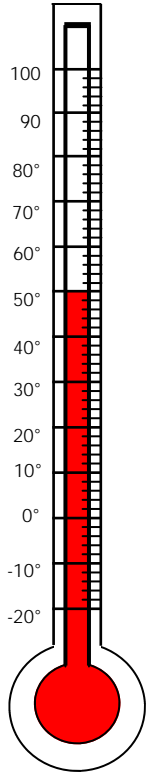
Write the number that is in the hundreds place.

5,830 \_\_\_\_\_

$\begin{array}{r} 11 \\ - 7 \\ \hline \end{array}$	$\begin{array}{r} 336 \\ + 384 \\ \hline \end{array}$	$\begin{array}{r} 331 \\ - 283 \\ \hline \end{array}$	$\begin{array}{r} \$8.59 \\ + 1.39 \\ \hline \end{array}$
--	---	---	---

What is the temperature?

\_\_\_\_\_



Use the editing marks to fix this sentence. Rewrite it correctly.



jody carter she mooved to dayton tennessee in december uv 2007

\_\_\_\_\_

-----

\_\_\_\_\_

-----

\_\_\_\_\_

-----

\_\_\_\_\_

-----

\_\_\_\_\_

Put the words in ABC order:

bite      best      bowl      bugs      bank

\_\_\_\_\_

Name: \_\_\_\_\_

Score: \_\_\_\_\_

### Daily Work

Today is: \_\_\_\_\_

How much?



Complete:

5, 10, 15, \_\_\_\_\_, \_\_\_\_\_

What comes after?

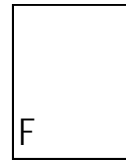
149 \_\_\_\_\_

What is the missing number?


$$\boxed{\phantom{00}} - 7 = 13$$

$\begin{array}{r} 13 \\ + 5 \\ \hline \end{array}$	$\begin{array}{r} 772 \\ - 538 \\ \hline \end{array}$	$\begin{array}{r} 535 \\ + 258 \\ \hline \end{array}$	$\begin{array}{r} \$ 4.58 \\ + 1.17 \\ \hline \end{array}$	$\begin{array}{r} \$ 6.72 \\ - 2.58 \\ \hline \end{array}$
--	---	---	--	--

Draw this shape turned flipped upside down.



Write a short paragraph that explains this picture.  
What season is it? What is happening?  
Please use complete sentences and remember all rules! Indent!



Name: \_\_\_\_\_

Score: \_\_\_\_\_

Daily Work

Today is: \_\_\_\_\_

There are 66 roses, 58 daisies, and 37 pansies planted in the garden. How many flower plants are in the garden altogether? Please circle the clue words and show your work.

There are \_\_\_\_\_ flower plants altogether.

Use > or <

216 ○ 223

Complete:

21, 24, 27, \_\_\_\_\_, \_\_\_\_\_

What comes after?

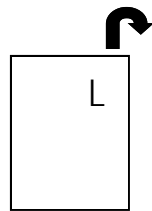
200 \_\_\_\_\_

What is the missing number?

$$\square - 8 = 3$$

$$\begin{array}{r} 92 \\ - 23 \\ \hline \end{array} \quad \begin{array}{r} 539 \\ + 378 \\ \hline \end{array}$$

Draw this shape rotated once to the right.



• How sides does a triangle have?

\_\_\_\_\_

• How many angles does a triangle have?

\_\_\_\_\_

Circle the subject noun in this sentence.

A day later than expected, the huge package arrived in the mail.

Please circle the correct verb.

The train is ( travel traveled traveling ) down the tracks toward the city.

Circle the correct word choice in each sentence.

• Melody bought ( a an ) onion and some spaghetti sauce.

• Suzanne's dad has ( a an ) shiny new car.

• Mr. Henson wanted to visit ( a an ) aunt in Michigan.

Name: \_\_\_\_\_

Score: \_\_\_\_\_

Daily Work

Today is: \_\_\_\_\_

Sally was born in 1928. Bruce was born in 1956.  
How much younger is Bruce?  
Please show your work.

Bruce is \_\_\_\_\_ years younger than Sally.

Mark the number that is greater than  $9 + 8$ .

- 16
- 19
- 17

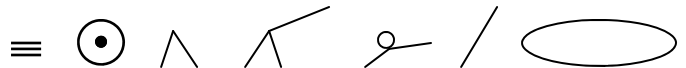
Please finish the graph using the information below.

Please write a title for the graph: \_\_\_\_\_

blue									
green									
red									
purple									

- Use a red crayon to show 8 kids like red.
- Use a green crayon to show 5 kids like green.
- Use a purple crayon to show 3 kids like purple.
- Use a blue crayon to show 8 kids like blue.

Use the editing marks to fix this sentence. Rewrite it correctly.



mr marks he askt who wil be going To the edison school winter carnival

\_\_\_\_\_

-----

\_\_\_\_\_

-----

\_\_\_\_\_

-----

\_\_\_\_\_

-----

\_\_\_\_\_

Write an antonym (means the opposite) for the underlined word.

1. Cloudy days may bring rain. \_\_\_\_\_

2. Cheryl loves to play on the swings. \_\_\_\_\_