

Name: \_\_\_\_\_

Score: \_\_\_\_\_

Date: \_\_\_\_\_

Reading: Jim is so nice. Jim has a box. The toys fell from the box.



Editing: Please fix.



capital letter



period

pat likes to play on the swings

Please write the sentence correctly.

\_\_\_\_\_

-----

\_\_\_\_\_

-----

\_\_\_\_\_

Math: Write the numbers from 41 to 50. Color the even numbers blue.

--	--	--	--	--	--	--	--	--	--

Circle the doll that is third from the X.



$3 + 4 = \underline{\quad}$

$5 + 2 = \underline{\quad}$

$7 - 2 = \underline{\quad}$

$4 - 2 = \underline{\quad}$

Name: \_\_\_\_\_

Score: \_\_\_\_\_

Date: \_\_\_\_\_

Phonics: Please mark the letter for the **ending** sound.



Sentences: Ted is so \_\_\_\_\_.

sat sad sap



\_\_\_\_\_


\_\_\_\_\_

\_\_\_\_\_

Math • Write the missing number.


17, \_\_\_\_\_, 19, 20

• Color the longest rectangle yellow.



• Write the odd numbers.

1, \_\_\_\_\_, \_\_\_\_\_, \_\_\_\_\_, \_\_\_\_\_

• How much is this  worth?

1¢       10¢       5¢

$6 + 4 = \underline{\quad}$        $3 + 3 = \underline{\quad}$

$6 - 2 = \underline{\quad}$        $7 - 7 = \underline{\quad}$

Name: \_\_\_\_\_

Score: \_\_\_\_\_

Date: \_\_\_\_\_

Reading: There are \_\_\_\_\_ balloons. One is blue. One is green.



three

six

two

Sentences: Where is Mrs. Brown?

lake lack



\_\_\_\_\_

-----

\_\_\_\_\_

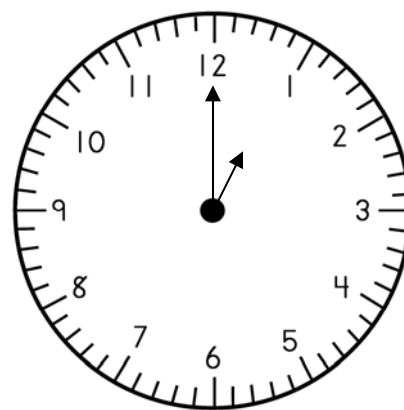
Math:

• If today is Thursday, yesterday was:

- Monday
- Wednesday
- Friday

Please write the time.

\_\_\_\_\_



Please finish:

10, \_\_\_\_\_, 12, \_\_\_\_\_, \_\_\_\_\_, 15, \_\_\_\_\_, \_\_\_\_\_, \_\_\_\_\_, 19, \_\_\_\_\_

$7 + 2 = \underline{\quad}$        $5 + 1 = \underline{\quad}$

$2 - 0 = \underline{\quad}$        $8 - 1 = \underline{\quad}$

Name: \_\_\_\_\_

Score: \_\_\_\_\_

Date: \_\_\_\_\_

Reading: I can see Mr. Martin. Mr. Martin is a cook. He likes his job.



Editing: Please fix.



capital letter



period

ann and pam have a new pet

Please write the sentence correctly.

\_\_\_\_\_

-----

\_\_\_\_\_

\_\_\_\_\_

-----

\_\_\_\_\_

Math: Write the numbers from 41 to 50. Color the number that comes **after** 46 green.

--	--	--	--	--	--	--	--	--	--

June has 6 dolls. She got 5 more dolls for her birthday. Draw 6 dolls.  
Then, draw 5 more dolls. How many dolls does June have in all?

$$\underline{\quad} + \underline{\quad} = \underline{\quad}$$

June has \_\_\_\_\_ dolls in all.

Name: \_\_\_\_\_

Score: \_\_\_\_\_

Date: \_\_\_\_\_

Phonics: Please mark the letter for the **ending** sound.



l

b

t

Sentences: Beth has a \_\_\_\_\_.

cake    cape







\_\_\_\_\_  
\_\_\_\_\_  
\_\_\_\_\_

Math • Write the missing number.


25, \_\_\_\_\_, 27, 28

• Circle the shortest rectangle.



• Write the even numbers.

2, \_\_\_\_\_, \_\_\_\_\_, \_\_\_\_\_

• How much is this  worth?

1¢

10¢

5¢

$9 + 5 = \underline{\quad}$      $7 + 3 = \underline{\quad}$

$4 - 0 = \underline{\quad}$      $7 - 6 = \underline{\quad}$