

Name: _____

Score: _____

Daily Work

Today is: _____



What's the time?

It is night.

What will the time be in four hours?

What was the time four hours ago?

Please complete.

12, 24, 36, _____, _____

Please draw a fraction to show nine-twelfths.

$$\begin{array}{r} 79,000 \\ - 59,438 \\ \hline \end{array}$$

$$\begin{array}{r} 89,577 \\ + 68,298 \\ \hline \end{array}$$

$$\begin{array}{r} 745 \\ \times 8 \\ \hline \end{array}$$

$$\begin{array}{r} 43 \\ \times 18 \\ \hline \end{array}$$

$$6 \overline{) 476}$$

- Use the editing marks to correct this sentence. Rewrite it correctly on the lines.

in abut six weaks miss amy p fine she wil drive to fort smith Arkansas four a reunion

- Please put the words into ABC order:

robot	rotor	roll	robber	roller
-------	-------	------	--------	--------

- Please circle the compound words in the sentence.

Without an understanding of the problem, Jack had to request for extra help on his homework.

Name: _____

Score: _____

Daily Work

Today is: _____

Write \$573.81 in words:

$$\begin{array}{r} 987,756 \\ + 49,856 \\ \hline \end{array}$$

Write seventeen thousand four hundred:

Round to the nearest thousand:

7,493 _____

$$\begin{array}{r} 534,243 \\ - 54,772 \\ \hline \end{array}$$

One more than 2,809:

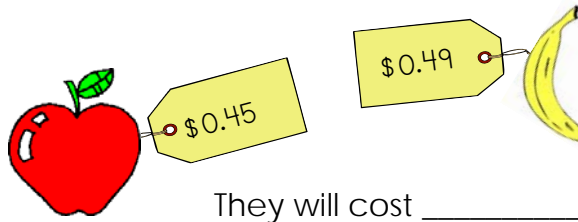
What is the value of the 6 in 5,682,907?

- 600,000 60,000 6,000

$$\begin{array}{r} \square \\ - 619 \\ \hline 532 \end{array}$$

$$\begin{array}{r} \square \\ + 583 \\ \hline 890 \end{array}$$

How much will 5 apples and 4 bananas cost in all?



They will cost _____.

Use the editing marks to fix this sentence. Rewrite it correctly.

mr edward t benjamin he livs in yonkers new york

Replace the underlined words with pronouns:

- Amanda gave a new book to Joey and Michael.

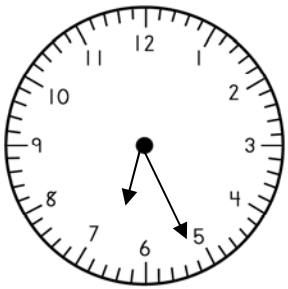


Name: _____

Score: _____

Daily Work

Today is: _____



What's the time?

It is morning.

What will the time be in four hours?

What was the time four hours ago?

Please write the decimals in order from least to greatest.

0.37	0.55	1.02	0.28	0.81
------	------	------	------	------

$$\begin{array}{r} 75,020 \\ - 56,892 \\ \hline \end{array}$$

$$\begin{array}{r} 87,570 \\ + 65,298 \\ \hline \end{array}$$

$$\begin{array}{r} 283 \\ \times 9 \\ \hline \end{array}$$

$$\begin{array}{r} 57 \\ \times 25 \\ \hline \end{array}$$

- Use the editing marks to correct this sentence. Rewrite it correctly on the lines.

kenneth t morrison he finded a neu route To werk by going down kirby street

- Please put the words into ABC order:

resolve	rejoice	respect	repeat	retake
---------	---------	---------	--------	--------

- Please circle the compound words in the sentence.

Below the gnarled tree sat a weary group of firemen who had just fought a warehouse blaze.

Name: _____

Score: _____

Daily Work

Today is: _____

Natalie jogs 7 miles every week. How many total miles will Natalie jog in two months? What information must you know in order to answer this question?

- Find the sum of all the odd numbers: _____

67 122
 106
70 29
 83
39 94
 63

Which has an answer that is closest to 80?

- 12×9
- 13×6
- 9×6


Use $>$, $<$, or $=$

$12 \times 3 \times 3$ $7 \times 5 \times 4$

Please finish:

980, 960, 940, _____, _____, _____

Write a short paragraph explaining what might have caused this to happen.
Please indent!
Please remember to read your paragraph for errors!



Name: _____

Score: _____

Daily Work

Today is: _____

Write the number that is in the millions place: 9,702,468 _____

Write this number in standard form: 600,000 + 3,000 + 500 + 70 + 2 _____

What is the value of the 8 in 786,290? _____

$$\begin{array}{r} 585,618 \\ + 379,485 \\ \hline \end{array}$$

$$\begin{array}{r} 60,904 \\ - 38,465 \\ \hline \end{array}$$

$$\begin{array}{r} 38 \\ \times 32 \\ \hline \end{array}$$

$$7 \overline{)398}$$

- Please add the fractions.
- Change to a mixed number.

$$\frac{6}{7} + \frac{6}{7} = \underline{\quad}$$

Find the missing numbers:

$$\begin{array}{r} \square \\ + 254 \\ \hline 602 \end{array}$$

$$\begin{array}{r} \square \\ - 95 \\ \hline 243 \end{array}$$

$$\begin{array}{r} \square \\ + 972 \\ \hline 2,108 \end{array}$$

$$\begin{array}{r} 602 \\ - \square \\ \hline 236 \end{array}$$

- Please circle the adjectives:
- Walking across the crowded parking lot in the blazing heat, Mrs. Carter felt dizzy.

- Write the base (root) word for each word on the line.

unpopulated

misdirected

troubling

- Please put the words into ABC order.

cough	caution	common	callous	caption
-------	---------	--------	---------	---------