

Name: _____

Score: _____

Morning Math

Today is: _____

Write the numbers from 91 to 100. Color the number that is 1 less than 97 red.

○ ○ ○ ○ ○ ○ ○ ○ ○ ○

Create a tally mark chart showing:

- 5 kids like apples
- 8 kids like grapes
- 11 kids like bananas

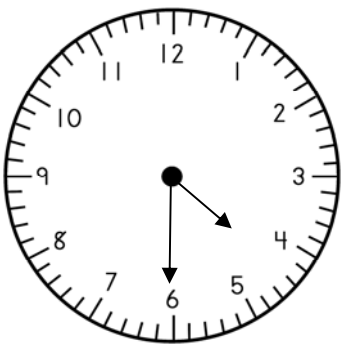
apples	grapes	bananas

Find the missing numbers.

- 4 = 4

- 2 = 4

What is the time?



:

Mark the true statement.

$8 - 5 = 3$

$7 - 4 = 2$

$6 - 2 = 3$

$$\begin{array}{r} 8 \\ + 4 \\ \hline \end{array}$$

$$\begin{array}{r} 9 \\ + 6 \\ \hline \end{array}$$

$$\begin{array}{r} 4 \\ + 2 \\ \hline \end{array}$$

$$\begin{array}{r} 7 \\ - 3 \\ \hline \end{array}$$

$$\begin{array}{r} 13 \\ - 9 \\ \hline \end{array}$$

Name: _____

Score: _____

Math Homework

Today is: _____

Write the numbers from 101 to 110. Color the number that is 2 less than 110 blue.

○ ○ ○ ○ ○ ○ ○ ○ ○ ○

Create a tally mark chart showing:

- 9 kids like apples
- 7 kids like grapes
- 10 kids like bananas

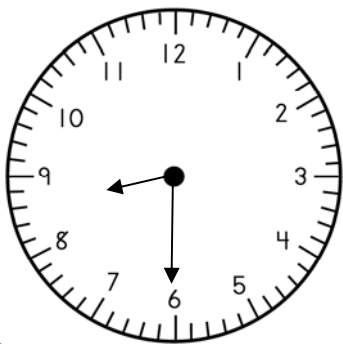
apples	grapes	bananas

Find the missing numbers.

$$\square - 1 = 5$$

$$\square - 3 = 4$$

What is the time?



□ : □

Mark the true statement.

$5 - 3 = 8$

$6 - 4 = 3$

$7 - 1 = 6$

$$\begin{array}{r} 6 \\ + 7 \\ \hline \end{array} \quad \begin{array}{r} 3 \\ + 4 \\ \hline \end{array} \quad \begin{array}{r} 9 \\ + 8 \\ \hline \end{array}$$

$$\begin{array}{r} 8 \\ - 4 \\ \hline \end{array} \quad \begin{array}{r} 13 \\ - 8 \\ \hline \end{array}$$

Name: _____

Score: _____

Morning Math

Today is: _____

Write the numbers from 101 to 110. Color the number that is 2 less than 103 green.

--	--	--	--	--	--	--	--	--	--

- Draw 12 green ovals.
- Draw 5 blue ovals.

How many fewer blue ovals than green?

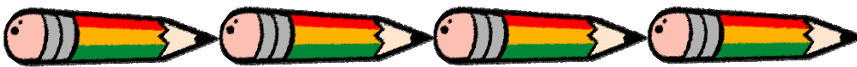
Find the missing numbers.

$$\square + 5 = 8$$

$$\square - 3 = 4$$

- Write the number that is 1 less than 30.

- How many pencils **in all** will it take to match the length of the line? _____



$$\begin{array}{r} 4 \\ + 1 \\ \hline \end{array} \quad 9 + 8 = \underline{\quad}$$

$$\begin{array}{r} 8 \\ - 5 \\ \hline \end{array} \quad 14 - 9 = \underline{\quad}$$

Name: _____

Score: _____

Math Homework

Today is: _____

Write the numbers from 101 to 110. Color the number that is 2 more than 106 green.

--	--	--	--	--	--	--	--	--	--

- Draw 11 blue circles.
- Draw 6 red circles.

How many more blue circles than red?

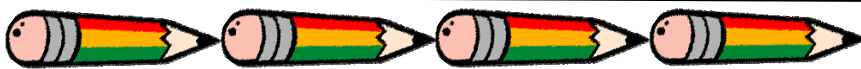
Find the missing numbers.

$$\square + 2 = 6$$

$$\square - 5 = 3$$

- Write the number that is 1 more than 27.

- How many pencils **in all** will it take to match the length of the line? _____



$$\begin{array}{r} 6 \\ + 6 \\ \hline \end{array} \quad 8 + 4 = \underline{\quad}$$

$$\begin{array}{r} 6 \\ - 2 \\ \hline \end{array} \quad 12 - 6 = \underline{\quad}$$

Name: _____

Score: _____

Morning Math

Today is: _____

Write the numbers from 101 to 110. Color the number that is 2 more than 107 yellow.

--	--	--	--	--	--	--	--	--	--

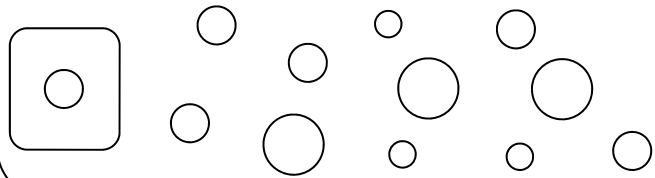
- What is the **sum** of 50 plus 10 more?

$$\begin{array}{r} 50 \\ + 10 \\ \hline \end{array}$$

- What is the **sum** of 26 plus 10 more?

$$\begin{array}{r} 26 \\ + 10 \\ \hline \end{array}$$

Color the shapes that are **congruent** to the shape in the box blue.



- Write the number represented by the tally marks.



- Favorite Juices

orange						
grape						
apple						

- More kids like _____.

orange grape apple

- How many kids like grape juice?

4 3 6

$$\begin{array}{r} 10 \\ + 10 \\ \hline \end{array} \quad 8 + 8 = \underline{\quad}$$

$$\begin{array}{r} 7 \\ - 6 \\ \hline \end{array} \quad 14 - 8 = \underline{\quad}$$

Name: _____

Score: _____

Math Homework

Today is: _____

Write the numbers from 101 to 110. Color the number that is 2 less than 103 orange.

--	--	--	--	--	--	--	--	--	--

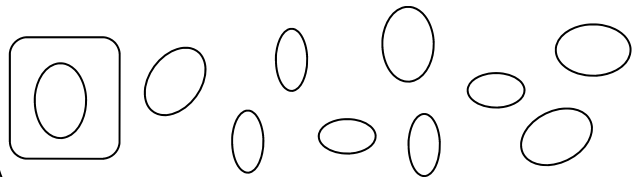
- What is the **sum** of 30 plus 10 more?

$$\begin{array}{r} 30 \\ + 10 \\ \hline \end{array}$$

- What is the **sum** of 35 plus 10 more?

$$\begin{array}{r} 35 \\ + 10 \\ \hline \end{array}$$

Color the shapes that are **congruent** to the shape in the box orange.



- Write the number represented by the tally marks.



- Favorite Juices

orange						
grape						
apple						

- More kids like _____.

orange grape apple

- How many kids like orange juice?

4 5 6

$$\begin{array}{r} 4 \\ + 9 \\ \hline \end{array} \quad 7 + 7 = \underline{\quad}$$

$$\begin{array}{r} 6 \\ - 2 \\ \hline \end{array} \quad 13 - 8 = \underline{\quad}$$

Name: _____

Score: _____

Morning Math

Today is: _____

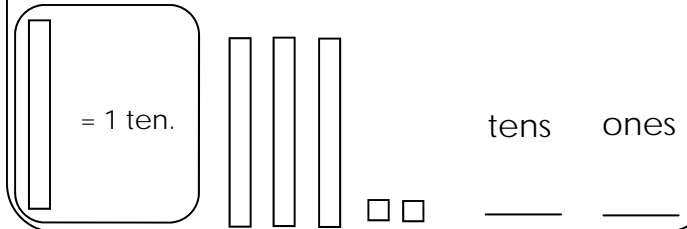
Write the numbers from 101 to 110. Color the number that is 2 less than 103 green.

--	--	--	--	--	--	--	--	--	--


Al has 12 pieces of gum.
He gives 8 pieces of gum away.
Draw to show this problem.

How many pieces of gum
does Al **have left**? _____

- Count the tens.
- Count the ones.



Draw a line to make
2 equal parts.



- How many rectangles **in all** will it take
to match the length of the line? _____



$$\begin{array}{r} 6 \\ + 6 \\ \hline \end{array}$$

$$\begin{array}{r} 3 \\ + 3 \\ \hline \end{array}$$

$$\begin{array}{r} 5 \\ + 5 \\ \hline \end{array}$$

$$\begin{array}{r} 7 \\ - 7 \\ \hline \end{array}$$

$$\begin{array}{r} 14 \\ - 6 \\ \hline \end{array}$$

Name: _____

Score: _____

Math Homework

Today is: _____

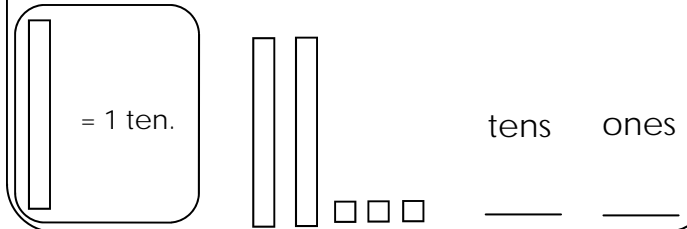
Write the numbers from 101 to 110. Color the number that is 2 more than 108 orange.

--	--	--	--	--	--	--	--	--	--

Kim has 9 crayons.
She gave 5 crayons to Tom.
Draw to show this problem.

How many crayons does
Kim **have left**? _____

- Count the tens.
- Count the ones.



Draw a line to make
2 equal parts.



- How many rectangles **in all** will it take
to match the length of the line? _____



$$\begin{array}{r} 9 \\ + 5 \\ \hline \end{array}$$

$$\begin{array}{r} 6 \\ + 6 \\ \hline \end{array}$$

$$\begin{array}{r} 8 \\ + 8 \\ \hline \end{array}$$

$$\begin{array}{r} 9 \\ - 0 \\ \hline \end{array}$$

$$\begin{array}{r} 14 \\ - 7 \\ \hline \end{array}$$

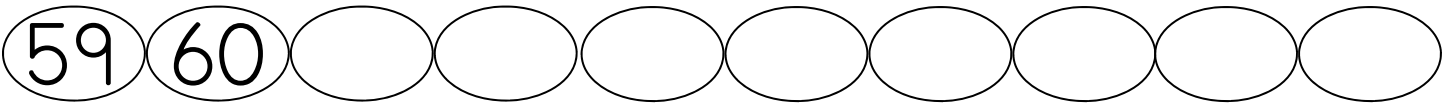
Name: _____

Score: _____

Morning Math Test

Today is: _____

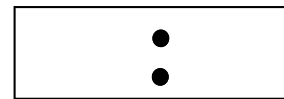
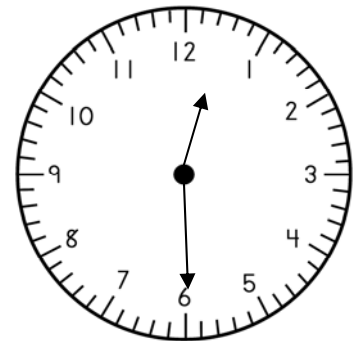
Continue counting. Color the number that is 2 more than 67 green.



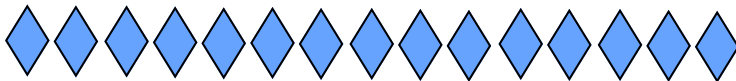
- Ben has 10 gumballs.
- He gives 4 of the gumballs away.
- Draw to show this problem.

How many gumballs does Ben **have left**? _____

What is the time?



Cross out 9 diamonds.



$$\begin{array}{r} 15 \\ - 9 \\ \hline \end{array}$$

How many diamonds are left? _____

$$\begin{array}{r} 10 \\ + 10 \\ \hline \end{array} \quad \begin{array}{r} 4 \\ + 6 \\ \hline \end{array} \quad \begin{array}{r} 3 \\ + 9 \\ \hline \end{array}$$

$$\begin{array}{r} 8 \\ - 5 \\ \hline \end{array} \quad \begin{array}{r} 12 \\ - 7 \\ \hline \end{array} \quad \begin{array}{r} 4 \\ - 4 \\ \hline \end{array}$$

Name: _____

Score: _____

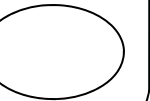
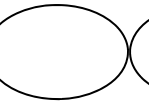
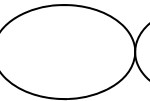
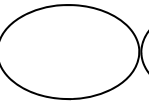
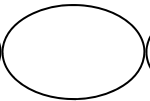
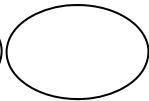
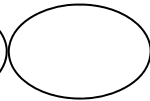
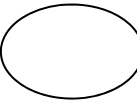
Math Homework

Today is: _____

Continue counting. Color the number that is 2 less than 66 blue.

63

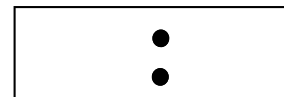
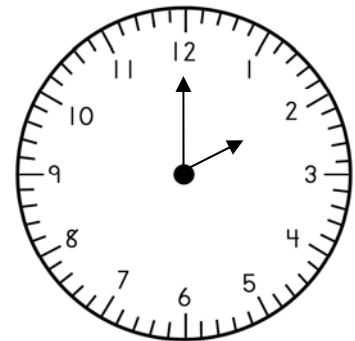
64



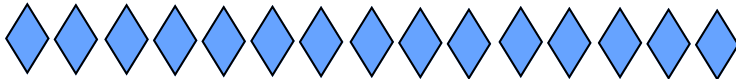
- Bobby counted 5 black ants and 7 red ants.
- Draw to show this.

How many ants did Bobby count **altogether**?

What is the time?



Cross out 6 diamonds.



$$\begin{array}{r} 15 \\ - 6 \\ \hline \end{array}$$

How many diamonds are left? _____

$$\begin{array}{r} 8 \\ + 6 \\ \hline \end{array} \quad \begin{array}{r} 5 \\ + 3 \\ \hline \end{array} \quad \begin{array}{r} 9 \\ + 7 \\ \hline \end{array}$$

$$\begin{array}{r} 4 \\ - 2 \\ \hline \end{array} \quad \begin{array}{r} 12 \\ - 9 \\ \hline \end{array} \quad \begin{array}{r} 9 \\ - 2 \\ \hline \end{array}$$