

Name: _____

Score: _____

Morning Math

Today is: _____

Write the numbers from 241 to 250. Color the number that is 5 more than 253 red.

--	--	--	--	--	--	--	--	--	--

- Draw an array to show this problem.
- Write the answer to the problem.

$$2 + 2 + 2 + 2 = \underline{\quad}$$

- Write the number that is 100 more than 503. _____

- The number 9 is:

odd even

- The store had 95 bags of potato chips.
- On Friday, 31 bags were sold.
- On Saturday 43 bags were sold.
- How many bags of potato chips are left?
- Circle the clue words.
- Write and solve this problem.

$$51 + 27 = \underline{\quad}$$

$$4 + 6 = \underline{\quad}$$

$$62 - 23 = \underline{\quad}$$

$$15 - 9 = \underline{\quad}$$

Name: _____

Score: _____

Math Homework

Today is: _____

Write the numbers from 241 to 250. Color the number that is 5 less than 249 orange.

--	--	--	--	--	--	--	--	--	--

- Draw an array to show this problem.
- Write the answer to the problem.

$$4 + 4 + 4 + 4 + 4 = \underline{\quad}$$

- Write the number that is 100 more than 536. _____

- The number 6 is:

odd even

- The store had 88 bags of potato chips.
- It sold 22 bags on Monday.
- It sold 15 bags on Tuesday.
- How many bags of potato chips are left?
- Circle the clue words.
- Write and solve this problem.

$$70 + 28 = \underline{\quad}$$

$$9 + 7 = \underline{\quad}$$

$$44 - 35 = \underline{\quad}$$

$$10 - 7 = \underline{\quad}$$

Name: _____

Score: _____

Morning Math

Today is: _____

Write the numbers from 251 to 260. Color the number that comes between 252 and 254 red.

○ ○ ○ ○ ○ ○ ○ ○ ○ ○

Mark the fraction.



$\frac{1}{2}$

$\frac{1}{4}$

$\frac{1}{3}$

Write the number that comes before.

_____, 155

- Dan has 44 cents.
- Use the highest valued coins to draw this amount.

• How much?



$$\begin{array}{r} 224 \\ + 237 \\ \hline \end{array}$$

$$\begin{array}{r} 59 \\ + 20 \\ \hline \end{array}$$

$$\begin{array}{r} 58 \\ + 48 \\ \hline \end{array}$$

$$\begin{array}{r} 5 \\ - 1 \\ \hline \end{array}$$

$$\begin{array}{r} 89 \\ - 75 \\ \hline \end{array}$$

$$\begin{array}{r} 76 \\ - 48 \\ \hline \end{array}$$

Name: _____

Score: _____

Math Homework

Today is: _____

Write the numbers from 251 to 260. Color the number that comes between 255 and 257 red.

--	--	--	--	--	--	--	--	--	--

Mark the fraction.



$\frac{1}{2}$

$\frac{1}{4}$

$\frac{1}{3}$

Write the number that comes before.

_____, 200

- Adam has 49 cents.
- Use the highest valued coins to draw this amount.

• How much?



$\begin{array}{r} 458 \\ + 216 \\ \hline \end{array}$	$\begin{array}{r} 88 \\ + 34 \\ \hline \end{array}$	$\begin{array}{r} 65 \\ + 23 \\ \hline \end{array}$
---	---	---

$\begin{array}{r} 7 \\ - 5 \\ \hline \end{array}$	$\begin{array}{r} 83 \\ - 56 \\ \hline \end{array}$	$\begin{array}{r} 87 \\ - 43 \\ \hline \end{array}$
---	---	---

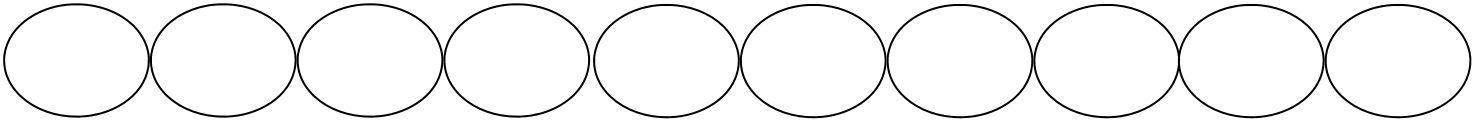
Name: _____

Score: _____

Morning Math

Today is: _____

Count by 5, starting at 30. Color the number that is 5 less than 55 red.

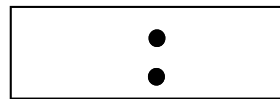
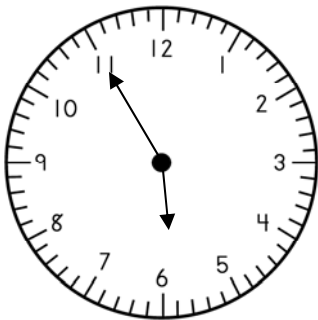


- 46 birds are by the pond.
- 38 more birds fly to the pond.
- How many total birds are there?
- Circle the clue words.
- Write and solve this problem.



• How much? _____

What is the time?



Mark the true statement.

- $37 - 21 = 19$
- $29 - 12 = 16$
- $22 - 11 = 11$

$$\begin{array}{r} 620 \\ + 128 \\ \hline \end{array} \quad \begin{array}{r} 54 \\ + 48 \\ \hline \end{array} \quad \begin{array}{r} 6 \\ + 4 \\ \hline \end{array}$$

$$\begin{array}{r} 7 \\ - 6 \\ \hline \end{array} \quad \begin{array}{r} 12 \\ - 6 \\ \hline \end{array} \quad \begin{array}{r} 80 \\ - 37 \\ \hline \end{array}$$

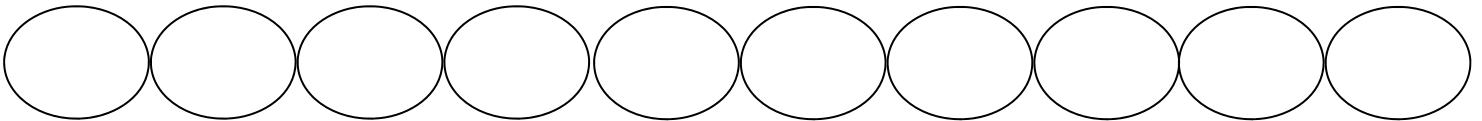
Name: _____

Score: _____


Math Homework

Today is: _____

Count by 5, starting at 35. Color the number that is 5 more than 65 red.

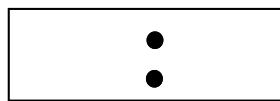
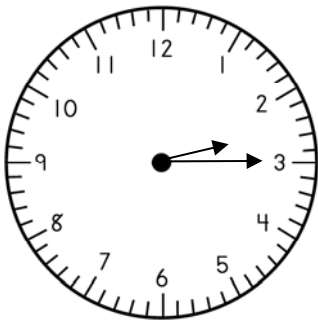


- 88 birds are by the pond.
- 59 birds flew away.
- How many birds are left?
- Circle the clue words.
- Write and solve this problem.



• How much? _____

What is the time?



Mark the true statement.

- $28 - 12 = 14$
- $35 - 20 = 15$
- $26 - 9 = 16$

$$\begin{array}{r} 449 \\ + 127 \\ \hline \end{array} \quad \begin{array}{r} 83 \\ + 36 \\ \hline \end{array} \quad \begin{array}{r} 9 \\ + 4 \\ \hline \end{array}$$

$$\begin{array}{r} 8 \\ - 6 \\ \hline \end{array} \quad \begin{array}{r} 13 \\ - 9 \\ \hline \end{array} \quad \begin{array}{r} 47 \\ - 19 \\ \hline \end{array}$$

Name: _____

Score: _____




Math Homework

Today is: _____

Count by 10, starting at 20. Color the number that is ten more than 80 blue.

--	--	--	--	--	--	--	--	--	--

- Count the hundreds.
- Count the tens.
- Count the ones.

			_____	_____	_____	=	_____
			hundreds	tens	ones		

- What is the sum of 50 and 50?

What number is in the tens' place?

467 _____

What number is in the ones' place?

249 _____



- How much?

Use >, <, or =

$$12 - 3 \bigcirc 6 + 4$$

$$7 + 7 + 5 + 2 = \underline{\quad}$$

$$8 + 8 + 3 = \underline{\quad}$$

$$\begin{array}{r} 60 \\ - 24 \\ \hline \end{array}$$

$$\begin{array}{r} 85 \\ - 51 \\ \hline \end{array}$$

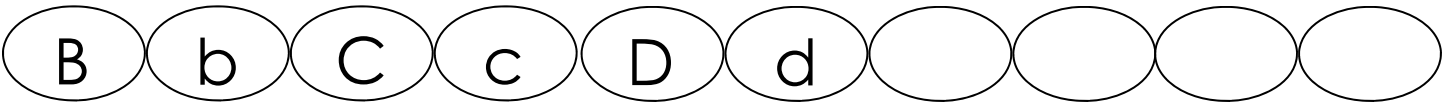
Name: _____

Score: _____

Morning Math Test

Today is: _____

Continue the pattern. Color the lowercase letters blue.



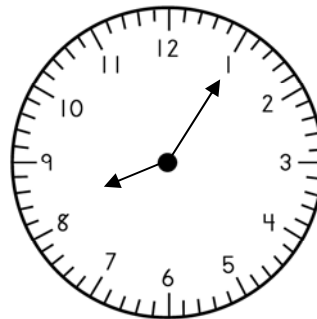
- Mark the number for the expanded form $700 + 9$.

790 799 709

- Mark the number that has a 3 in the tens' place.

316 163 631

What is the time?



- 8:05
- 5:40
- 1:40

How much?



Write the number that is 7 hundreds, 5 tens, and 2 ones.

$$\begin{array}{r} 179 \\ + 306 \\ \hline \end{array} \quad \begin{array}{r} 76 \\ + 34 \\ \hline \end{array} \quad \begin{array}{r} 7 \\ + 7 \\ \hline \end{array}$$

$$\begin{array}{r} 9 \\ - 6 \\ \hline \end{array} \quad \begin{array}{r} 12 \\ - 3 \\ \hline \end{array} \quad \begin{array}{r} 77 \\ - 38 \\ \hline \end{array}$$

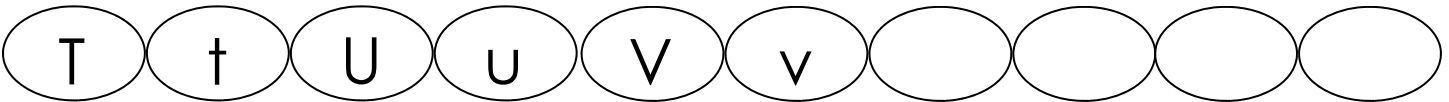
Name: _____

Score: _____

Math Homework

Today is: _____

Continue the pattern. Color the capital letters orange.



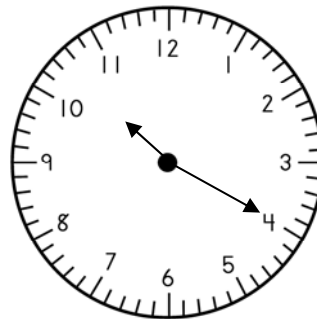
- Mark the number for the expanded form $500 + 20 + 6$.

256 525 526

- Mark the number that has a 1 in the hundreds' place.

316 163 631

What is the time?



- 4:50
- 10:40
- 10:20

- How much?



Write the number that is 3 hundreds, 8 tens, and 5 ones.

$$\begin{array}{r} 256 \\ + 408 \\ \hline \end{array} \quad \begin{array}{r} 47 \\ + 38 \\ \hline \end{array} \quad \begin{array}{r} 9 \\ + 8 \\ \hline \end{array}$$

$$\begin{array}{r} 6 \\ - 2 \\ \hline \end{array} \quad \begin{array}{r} 10 \\ - 8 \\ \hline \end{array} \quad \begin{array}{r} 99 \\ - 58 \\ \hline \end{array}$$