

Name: _____

Score: _____

Daily Work

Today is: _____

In 8 days it will be: _____

What is my pet's name?

- | | | | | |
|--------|-------|-------|-------|--------|
| Hooper | Sammy | Colby | Rusty | Pepper |
|--------|-------|-------|-------|--------|

- He is not last.
- He isn't left of Colby.
- He doesn't have an "O" in his name.

My pet's name is: _____

Please complete.

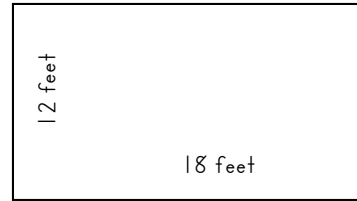
745, 725, 705, _____, _____, _____, _____, _____, _____

$$\begin{array}{r} 900,403 \\ - 688,893 \\ \hline \end{array}$$

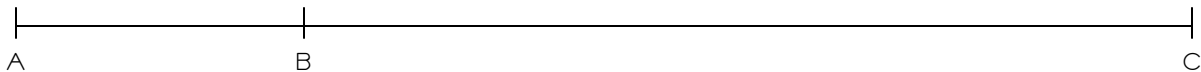
$$\begin{array}{r} 48 \\ \times 37 \\ \hline \end{array}$$

$$6 \overline{) 797}$$

What is the perimeter of this object?



- Please measure the distance from A to B to the nearest centimeter: _____
- Please measure the distance from B to C to the nearest centimeter: _____



• Write a pronoun to replace the underlined words:

Grandma and Grandpa Jones took Amy and me to the movies. _____

• Circle only the common nouns in this sentence:

The movie is at Harkins Theater in Mesa, Arizona near the Superstition Mall.

• Write an antonym for the underlined word: _____

They laughed so hard during the movie because it was really funny.

Name: _____

Score: _____

Daily Work

Today is: _____

Use the highest valued bills and coins you can to make \$57.73.

Write the ten thousands number: 647,208 _____	Write 300,000 + 60,000 + 400 + 90 in standard form: _____	It is 3:45 pm. Julie must be home at 5:00 pm. How long will she be gone? _____
--	---	--

$$\begin{array}{r} 845 \\ \times 8 \\ \hline \end{array}$$

$$\begin{array}{r} 65,201 \\ - 48,763 \\ \hline \end{array}$$

$$\begin{array}{r} 983,984 \\ + 487,673 \\ \hline \end{array}$$

$$7 \overline{)863}$$

$$\frac{65}{8} = \underline{\hspace{2cm}}$$

- Circle the subject of this sentence:

Popcorn flew all over the kitchen!

- Circle the homophones in this sentence:

Melody brushed the hair on her pet hare.

- Write a synonym for the underlined word:

Can you please assist me with a problem? _____

Put the words in ABC order:

deliver

deny

denominator

desk

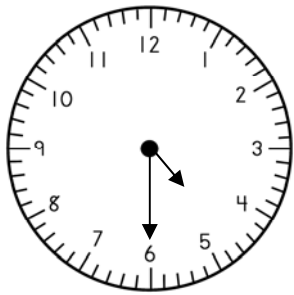
delight

Name: _____

Score: _____

Daily Work

Today is: _____



What's the time?

It is afternoon.

What will the time be in three and a quarter hours?

What was the time four and a half hours ago?

Please write the decimals in order from least to greatest.

1.18	1.56	0.77	0.70	1.29
------	------	------	------	------

$$\begin{array}{r} 75,442 \\ - 19,807 \\ \hline \end{array}$$

$$\begin{array}{r} 46,787 \\ + 29,156 \\ \hline \end{array}$$

$$\begin{array}{r} 68 \\ \times 39 \\ \hline \end{array}$$

$$\begin{array}{r} 765 \\ \times 7 \\ \hline \end{array}$$

- Use the editing marks to correct this sentence. Rewrite it correctly on the lines.

wen did mr harper moved to boise Idaho ask ron

- Please put the words into ABC order:

odor	ordered	odors	ordering	order
------	---------	-------	----------	-------

- Please circle the adjectives in the sentence.

The quivering rodent was frightened because a huge, hungry hawk was hovering overhead.

Name: _____

Score: _____

Daily Work

Today is: _____

How much?



Reggie is at the park. His mom told him leave for home by 6:00 pm. He has been at the park since 2:20 pm. How long will he be at the park? Please show your work.

Answer:

Solve:

$$\begin{array}{r} \$ 2,185.83 \\ + 5,287.59 \\ \hline \end{array}$$

$$\begin{array}{r} 98,378 \\ + 77,834 \\ \hline \end{array}$$

$$\begin{array}{r} 70,300 \\ - 59,144 \\ \hline \end{array}$$

$$\begin{array}{r} 74 \\ \times 29 \\ \hline \end{array}$$

$$8 \overline{)897}$$

Write a short paragraph about this creature.



Name: _____

Score: _____

Daily Work

Today is: _____

In 8 days it will be: _____

6 days ago it was: _____

$$\begin{array}{r}
 72 \\
 48 \\
 67 \\
 54 \\
 81 \\
 + 67 \\
 \hline
 \end{array}$$

$$\begin{array}{r}
 517 \\
 198 \\
 665 \\
 + 325 \\
 \hline
 \end{array}$$

$$\begin{array}{r}
 \square \\
 - 639 \\
 \hline
 488
 \end{array}$$

$$\begin{array}{r}
 \square \\
 + 987 \\
 \hline
 1,675
 \end{array}$$

- Which rule did James use going from A to B to get his answers?

A	B	Answer:
12	2	→ 6
24	12	→ 2
30	5	→ 6
27	3	→ 9

What did he do?

- Added A to B to get the answer.
- Subtracted B from A to get the answer.
- Multiplied A times B to get the answer.
- Divided A by B to get the answer.

- Please write an antonym for the underlined word:

The raging weather made Adam shake in fear. _____

- Write a synonym for the underlined word:

David's father pledged to take him to the movies on Friday. _____

Write the prefix for each word on the line:

disprove _____ tripod _____ refinish _____