

Name: _____

Score: _____

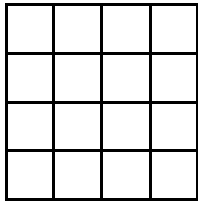
Morning Math

Today is: _____

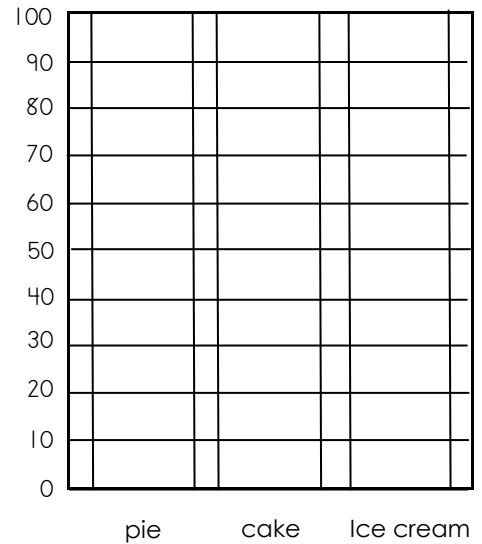
Write the numbers from 731 to 740. Color the number that is two less than 738 blue.

--	--	--	--	--	--	--	--	--	--

- What is the area of this object in square inches?



- Color the graph to show:
 - 30 people like pie.
 - 60 people like cake.
 - 90 people like ice cream.
- Which dessert is the favorite?



- Write 736 in expanded form.

- How many total people voted?

- Mr. Mueller has a total of 412 cows on his ranch.
- 188 are black and white, 93 are brown, and 45 are tan.
- The rest of his cows are brown and white.
- How many of the cows are brown and white?
- Please write and solve this problem.

$$\begin{array}{r} 2 \overline{)14} \\ 4 \\ \hline \end{array} \quad \begin{array}{r} 9 \overline{)81} \\ 81 \\ \hline \end{array}$$

$$\begin{array}{r} 4 \\ \times 9 \\ \hline \end{array} \quad \begin{array}{r} 3 \\ \times 6 \\ \hline \end{array}$$

$$\begin{array}{r} 443 \\ + 279 \\ \hline \end{array}$$

$$\begin{array}{r} 692 \\ - 504 \\ \hline \end{array}$$

Name: _____

Score: _____

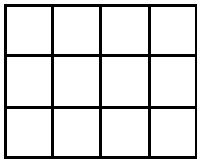
Math Homework

Today is: _____

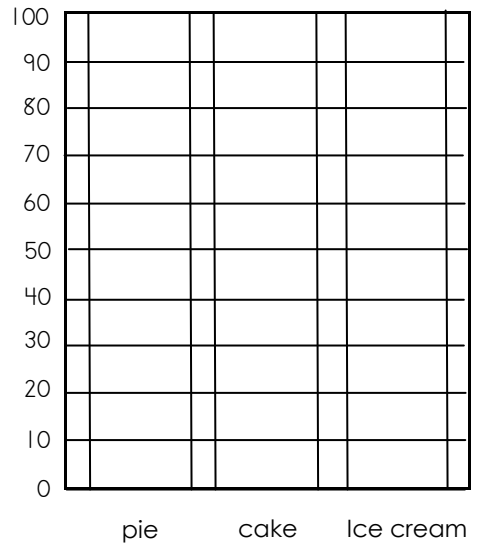
Write the numbers from 731 to 740. Color the number that is seven more than 733 green.

--	--	--	--	--	--	--	--	--	--

- What is the area of this object in square inches?



- Color the graph to show:
 - 60 people like pie.
 - 80 people like cake.
 - 100 people like ice cream.
- Which dessert is the least favorite?



- Write 392 in expanded form.

- How many more people like ice cream than pie?

- Mr. Mueller has a total of 320 cows on his ranch.
- 155 are black and white, 78 are brown, and 33 are tan.
- The rest of his cows are brown and white.
- How many of the cows are brown and white?
- Please write and solve this problem.

$$9 \overline{)27} \quad 7 \overline{)49}$$

$$\begin{array}{r} 9 \\ \times 7 \\ \hline \end{array} \quad \begin{array}{r} 6 \\ \times 8 \\ \hline \end{array}$$

$$\begin{array}{r} 376 \\ + 518 \\ \hline \end{array}$$

$$\begin{array}{r} 561 \\ - 476 \\ \hline \end{array}$$

Name: _____

Score: _____

Morning Math

Today is: _____

Write the missing numbers.

				691				695	
--	--	--	--	-----	--	--	--	-----	--



• How much?



• Mark the larger fraction.

$\frac{4}{6}$



$\frac{4}{5}$



Color to show $\frac{1}{9}$.



• Round each number to the nearest hundred.

507 = _____

729 = _____

$$\begin{array}{r} 9 \\ \times 9 \\ \hline \end{array}$$

$$\begin{array}{r} 4 \\ \times 5 \\ \hline \end{array}$$

$$\begin{array}{r} 6 \\ \times 7 \\ \hline \end{array}$$

$$\begin{array}{r} 3 \\ \times 0 \\ \hline \end{array}$$

$$\begin{array}{r} 8 \\ \times 1 \\ \hline \end{array}$$

$$\begin{array}{r} 5 \\ \times 2 \\ \hline \end{array}$$

Name: _____

Score: _____

Math Homework

Today is: _____

Write the missing numbers.


		654					659		
--	--	-----	--	--	--	--	-----	--	--

• How much?




• Mark the larger fraction.


$\frac{3}{6}$



$\frac{3}{7}$



Color to show $\frac{8}{9}$.



• Round each number to the nearest hundred.

$338 = \underline{\hspace{2cm}}$

$462 = \underline{\hspace{2cm}}$

3

x 6

9

x 5

7

x 7

4

x 3

6

x 5

4

x 2

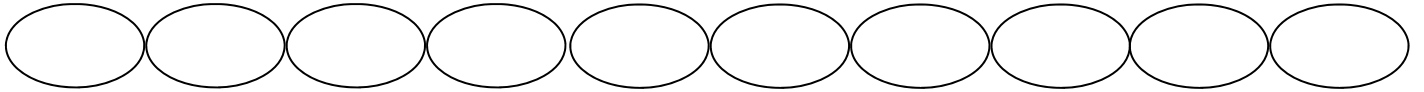
Name: _____

Score: _____

Morning Math

Today is: _____

Skip count by 5, starting at 250. Color the number that is 10 less than 275 green.



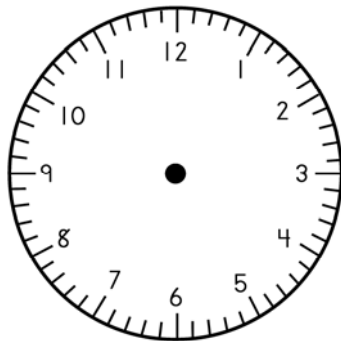
Color to show $\frac{7}{8}$.



Use $>$, $<$, or $=$


$$4 \times 1 \times 7 \quad \bigcirc \quad 3 \times 3 \times 3$$

Draw the hands on the clock.



11 : 53

How many sheep legs?
Write as a multiplication problem.
Solve the problem.



$$\begin{array}{r} 6 \\ \times 3 \\ \hline \end{array}$$

$$\begin{array}{r} 9 \\ \times 8 \\ \hline \end{array}$$

$$\begin{array}{r} 6 \\ \times 5 \\ \hline \end{array}$$

$$\begin{array}{r} 9 \\ \times 6 \\ \hline \end{array}$$

$$\begin{array}{r} 5 \\ \times 4 \\ \hline \end{array}$$

$$\begin{array}{r} 4 \\ \times 7 \\ \hline \end{array}$$

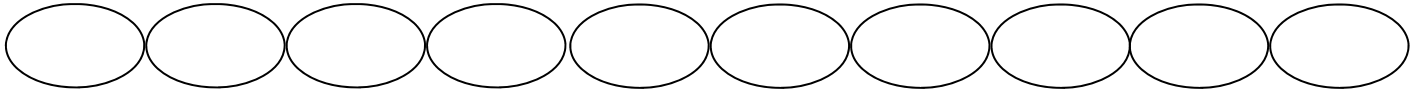
Name: _____

Score: _____

Math Homework

Today is: _____

Skip count by 5, starting at 210. Color the number that is 10 less than 235 green.



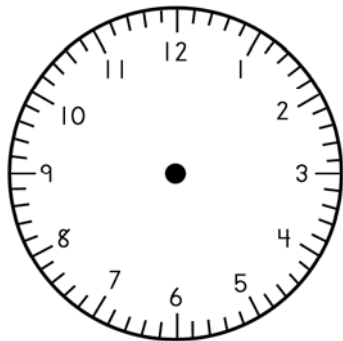
Color to show $\frac{5}{8}$.



Use $>$, $<$, or $=$


$$3 \times 2 \times 5 \bigcirc 4 \times 2 \times 3$$

Draw the hands on the clock.



9 : 03

How many monkey eyes?
Write as a multiplication problem.
Solve the problem.



$$\begin{array}{r} 7 \\ \times 9 \\ \hline \end{array}$$

$$\begin{array}{r} 4 \\ \times 8 \\ \hline \end{array}$$

$$\begin{array}{r} 1 \\ \times 4 \\ \hline \end{array}$$

$$\begin{array}{r} 7 \\ \times 6 \\ \hline \end{array}$$

$$\begin{array}{r} 6 \\ \times 4 \\ \hline \end{array}$$

$$\begin{array}{r} 8 \\ \times 6 \\ \hline \end{array}$$

Name: _____

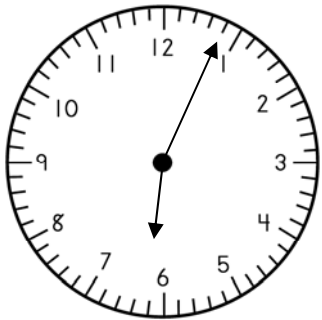
Score: _____

Morning Math

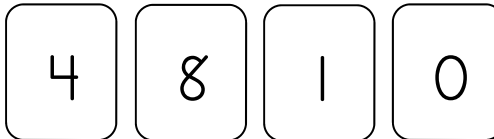
Today is: _____

- Jerry has \$9.81 and Bruce has \$4.92.
- Paula has \$7.95 and Julia has \$8.63.
- How much more money does Paula and Julia have than Jerry and Bruce?
- Write and solve this problem.

What is the time?
It is morning.



- Using each number card only once and only 3 cards, write the largest 3 digit number you can make.



$$\begin{array}{r} 309 \\ 116 \\ 326 \\ + 255 \\ \hline \end{array}$$

Complete the graph to show:

- 8 people like baseball.
- 15 people like basketball.
- 12 people like soccer.
- 5 people like hockey.

Favorite Sports

baseball																			
basketball																			
soccer																			
hockey																			

$$\begin{array}{r} 20 \\ \times 2 \\ \hline \end{array}$$

$$\begin{array}{r} 30 \\ \times 3 \\ \hline \end{array}$$

$$\begin{array}{r} 6 \\ \times 7 \\ \hline \end{array}$$

$$\begin{array}{r} 4 \\ \times 8 \\ \hline \end{array}$$

$$\begin{array}{r} 3 \\ \times 7 \\ \hline \end{array}$$

$$\begin{array}{r} 5 \\ \times 8 \\ \hline \end{array}$$

Name: _____

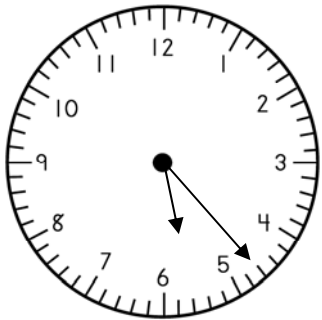
Score: _____

Math Homework

Today is: _____

- Pamela has \$8.55 and Nelly has \$3.75.
- Jack has \$7.32 and Brian has \$6.18.
- How much more money does Jack and Brian have than Pamela and Nelly?
- Write and solve this problem.

What is the time?
It is afternoon.



- Using each number card only once and only 3 cards, write the smallest 3 digit number you can make.

5

9

2

3

$$\begin{array}{r} 421 \\ 104 \\ 322 \\ + 135 \\ \hline \end{array}$$

Complete the graph to show:

- 3 people like baseball.
- 12 people like basketball.
- 15 people like soccer.
- 9 people like hockey.

Favorite Sports

baseball																			
basketball																			
soccer																			
hockey																			

$$\begin{array}{r} 40 \\ \times 2 \\ \hline \end{array}$$

$$\begin{array}{r} 10 \\ \times 4 \\ \hline \end{array}$$

$$\begin{array}{r} 8 \\ \times 7 \\ \hline \end{array}$$

$$\begin{array}{r} 6 \\ \times 4 \\ \hline \end{array}$$

$$\begin{array}{r} 9 \\ \times 4 \\ \hline \end{array}$$

$$\begin{array}{r} 9 \\ \times 8 \\ \hline \end{array}$$

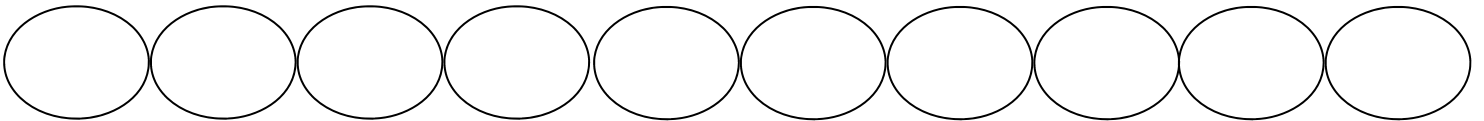
Name: _____

Score: _____

Morning Math

Today is: _____

Skip count by 3. Color the number that is 15 more than 3 blue.



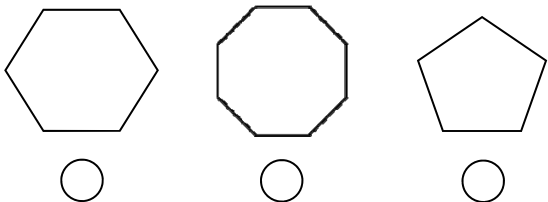
- Write the missing number for each problem.

$$\square \times 4 = 28$$


$$\square \times 6 = 36$$

$$\begin{array}{r} 99 \\ 95 \\ 92 \\ + 25 \\ \hline \end{array} \quad \begin{array}{r} 116 \\ 487 \\ + 259 \\ \hline \end{array}$$

Mark the hexagon.



Label each fractional part.



$$4 \overline{)36} \quad 9 \overline{)72}$$

$$\begin{array}{r} 8 \\ \times 5 \\ \hline \end{array}$$

$$\begin{array}{r} 7 \\ \times 4 \\ \hline \end{array}$$

$$\begin{array}{r} 583 \\ + 299 \\ \hline \end{array}$$

$$\begin{array}{r} 445 \\ - 365 \\ \hline \end{array}$$

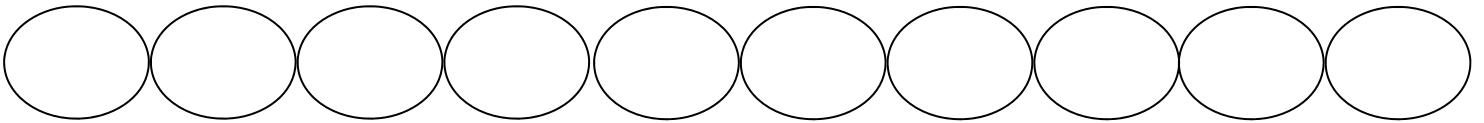
Name: _____

Score: _____

Math Homework

Today is: _____

Skip count by 4. Color the number that is 8 less than 32 yellow.



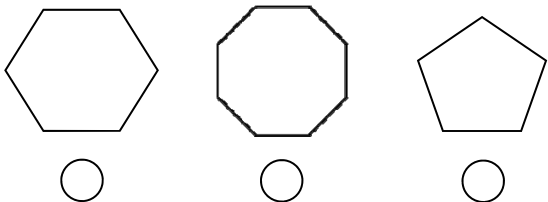
- Write the missing number for each problem.

$$\square \times 7 = 21$$

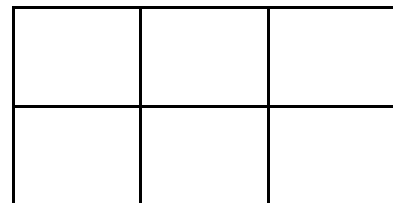
$$\square \times 9 = 36$$

$$\begin{array}{r} 86 \\ 46 \\ 79 \\ + 54 \\ \hline \end{array} \quad \begin{array}{r} 236 \\ 264 \\ + 197 \\ \hline \end{array}$$

Mark the octagon.



Label each fractional part.



$$5 \overline{)20} \quad 8 \overline{)24}$$

$$\begin{array}{r} 3 \\ \times 9 \\ \hline \end{array} \quad \begin{array}{r} 7 \\ \times 6 \\ \hline \end{array}$$

$$\begin{array}{r} 285 \\ + 465 \\ \hline \end{array}$$

$$\begin{array}{r} 630 \\ - 297 \\ \hline \end{array}$$