

Name: _____

Score: _____

Daily Work

Today is: _____

Jeremy hit the baseball 280 feet the first time and 169 feet the second time. How much farther did the first ball travel than the second one? Please circle the clue words and show your work.

The first ball went _____ feet farther.

| | | |
|--|---|---|
| What is ten less than eighty-two? _____ | Which number has a 7 in the tens and thousands place? <input type="radio"/> 47,307 <input type="radio"/> 74,370 <input type="radio"/> 47,073 | Write $4,000 + 900 + 50 + 8$ in standard form: _____ |
|--|---|---|

$$\begin{array}{r} 9,216 \\ - 6,734 \\ \hline \end{array}$$

$$\begin{array}{r} 4,779 \\ + 8,327 \\ \hline \end{array}$$

$$\begin{array}{r} 7 \\ \times 6 \\ \hline \end{array}$$

$$\begin{array}{r} 10 \\ \times 8 \\ \hline \end{array}$$

$$7 \overline{)35}$$

Write a short paragraph to explain what Mr. Cline has done that is illegal. What might he have done instead? Please read your work and fix errors!



Name: _____

Score: _____

Daily Work

Today is: _____



What's the time?

It is morning.

What will the time be in three hours?

What was the time three hours ago?

Please complete.

18, 24, 30, _____, _____

Write the fraction.



$$\begin{array}{r} 551 \\ - 264 \\ \hline \end{array}$$

$$\begin{array}{r} 876 \\ + 347 \\ \hline \end{array}$$

$$\begin{array}{r} 5 \\ \times 8 \\ \hline \end{array}$$

$$\begin{array}{r} 7 \\ \times 7 \\ \hline \end{array}$$

$$3 \overline{) 21}$$

- Use the editing marks to correct this sentence. Rewrite it correctly on the lines.

mr and mrs anderson liv in lexington kentucky On main street

- Please put the words into ABC order:

| | | | | |
|--------|------|------|------|------|
| willow | wife | will | wish | wind |
|--------|------|------|------|------|

- Please write a synonym for the underlined word.

The grumpy man shouted at his car when it didn't start. _____

Name: _____

Score: _____

Daily Work

Today is: _____

How much?



One more than 2,109:

How many legs on 3 peacocks, 5 zebras, and 2 camels?

Work the problem:

$9 \times 7 - 3 + 8 - 7 + 7 + 6 =$ _____

Raul has 12 dimes, 6 nickels, and 7 quarters. What is the value of the money Raul has?



$$\begin{array}{r} - 36 \\ \hline 63 \end{array}$$



$$\begin{array}{r} + 52 \\ \hline 91 \end{array}$$



$$\begin{array}{r} - 53 \\ \hline 80 \end{array}$$

- Underline the helping verb and circle the main verb in this sentence.

Mr. Michaels had found a hundred dollar bill on the beach.

- Circle the proper nouns in this sentence.

Dr. Bender works at Mercy Hospital in the emergency room.

- Please write a pronoun for the underlined words.

Dr. Bender helped a mother and her three children last night.

- Put the words in ABC order:

accidentally

accident

acting

action

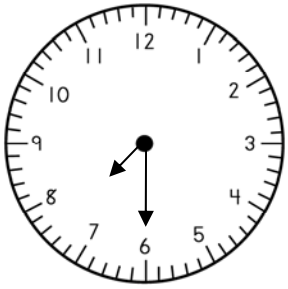
actor

Name: _____

Score: _____

Daily Work

Today is: _____



What's the time?


It is night.

What will the time be in four hours?

What was the time four hours ago?

Write an odd number between 280 and 290 whose digits equal 17.

Write the fraction.



$$\begin{array}{r} 5,903 \\ - 2,684 \\ \hline \end{array}$$

$$\begin{array}{r} 4,336 \\ + 7,904 \\ \hline \end{array}$$

$$\begin{array}{r} 7 \\ \times 7 \\ \hline \end{array}$$

$$\begin{array}{r} 8 \\ \times 9 \\ \hline \end{array}$$

$$6 \overline{) 54}$$

- Use the editing marks to correct this sentence. Rewrite it correctly on the lines.

manuel p flores he does werks for dupont hospital in fort wayne indiana

- Please put the words into ABC order:

| | | | | |
|------|--------|---------|------|---------|
| fall | faster | falling | fast | fastest |
|------|--------|---------|------|---------|

- Please write an antonym for the underlined word.

Max was depressed because he had failed his test.

Name: _____

Score: _____

Daily Work

Today is: _____

How much?

- 9 quarters
- 6 dimes
- 7 nickels
- 9 pennies

Terrance has \$63.80. His brother has \$58.29. How much money do they have in all?

They have _____.

$$\begin{array}{r} 62,993 \\ + 18,754 \\ \hline \end{array}$$

$$\begin{array}{r} 9 \\ \times 7 \\ \hline \end{array}$$

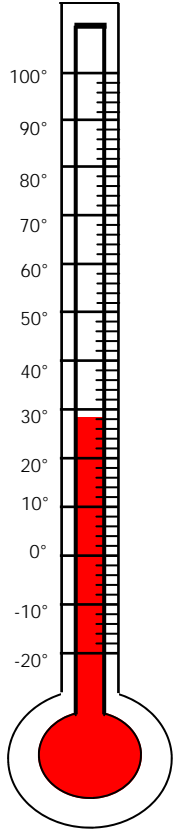
$$6 \overline{) 48}$$

What is the temperature?

The temperature is:

It is July. The temperature in Hawaii could be:

- 88° F
- 13° F
- 29° F



Mr. Hooper is collecting rocks on a distant planet. Write about this.
 Please remember all rules!
 Indent, please.
 Please read your sentence for errors!

