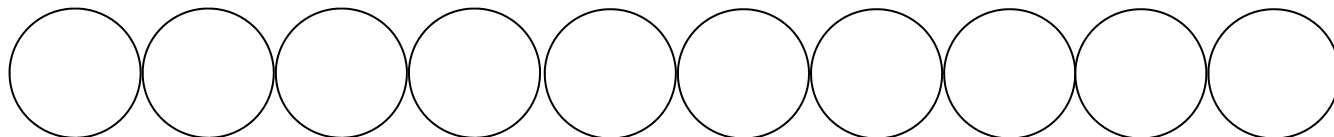


Name: _____

Score: _____

Morning Math

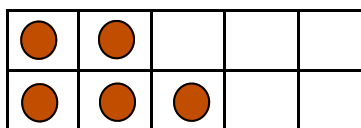


Color 3 circles blue. Color 2 circles red. How many circles are still white? _____

- Draw 3 green squares.
- Draw 4 yellow squares.
- Draw 2 blue circles.

- How many squares do you count in all? _____

How many more to make ten?

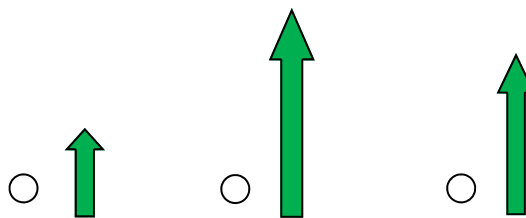


Mark the number that comes before 3.

- 1 4 2

Write the number that is 1 more than 8.

• Mark the shortest arrow.



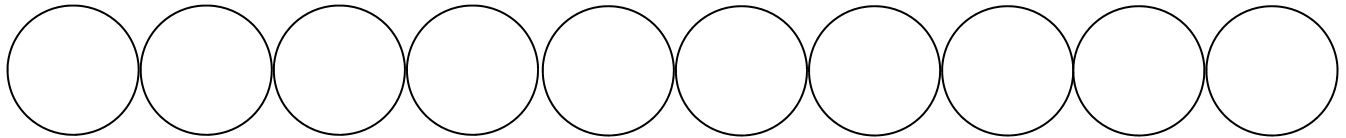
$$\begin{array}{r} 8 \\ + 1 \\ \hline \end{array} \qquad \begin{array}{r} 5 \\ + 2 \\ \hline \end{array}$$

$$\begin{array}{r} 4 \\ - 2 \\ \hline \end{array} \qquad \begin{array}{r} 5 \\ - 4 \\ \hline \end{array}$$

Name: _____

Score: _____

Math Homework

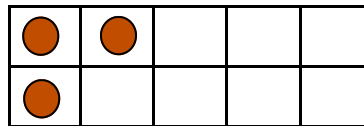


Color 2 circles green. Color 5 circles yellow. How many circles are still white? _____

- Draw 5 red circles.
- Draw 5 yellow circles.
- Draw 3 orange squares.

- How many circles do you count in all? _____

How many more to make ten?

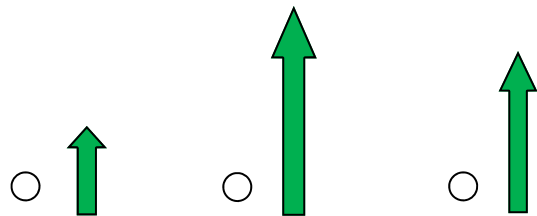


Mark the number that comes before 10.

8 9 11

Write the number that is 1 more than 9.

• Mark the tallest arrow.



$$\begin{array}{r} 5 \\ + 1 \\ \hline \end{array} \quad \begin{array}{r} 6 \\ + 3 \\ \hline \end{array}$$

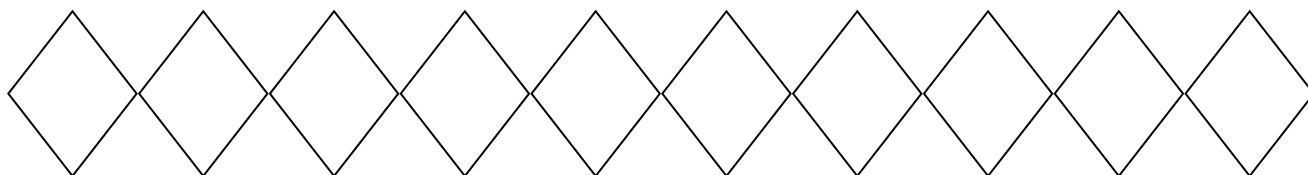
$$\begin{array}{r} 1 \\ - 0 \\ \hline \end{array} \quad \begin{array}{r} 2 \\ - 2 \\ \hline \end{array}$$

Name: _____

Score: _____

Morning Math

Write the numbers backward from 10 to 1. Color number 6 yellow.



Pam has 12 pennies. Mike has 6 pennies. Hal has 8 pennies.

Who has the most pennies?

- Pam
- Mike
- Hal

Write a subtraction problem with a difference of 2.

$$\begin{array}{r} - \\ \hline 3 \end{array}$$

Which weighs more?

- a puppy
- a lion

Cross out 2 cans.



How many cans are left?

$$\begin{array}{r} 9 \\ - 2 \\ \hline \end{array}$$

$$\begin{array}{r} 3 \\ + 6 \\ \hline \end{array} \quad \begin{array}{r} 5 \\ + 5 \\ \hline \end{array}$$

$$3 - 3 = \underline{\quad}$$

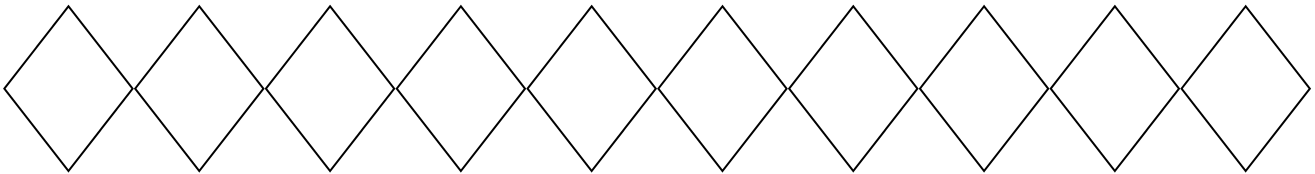
$$4 - 2 = \underline{\quad}$$

Name: _____

Score: _____

Math Homework

Write the numbers backward from 10 to 1. Color number 3 yellow.



Don has 8 crayons. Bill has 7 crayons. Jan has 10 crayons.

Who has the least crayons?

- Don
- Bill
- Jan

Write a subtraction problem with a difference of 3.

$$\begin{array}{r} - \\ \hline 3 \end{array}$$

Which weighs more?

- a cat
- a car

Cross out 7 cans.



How many cans are left?

$$\begin{array}{r} 9 \\ - 7 \\ \hline \end{array}$$

$$\begin{array}{r} 5 \\ + 2 \\ \hline \end{array}$$

$$\begin{array}{r} 6 \\ + 3 \\ \hline \end{array}$$

$$4 - 1 = \underline{\quad}$$

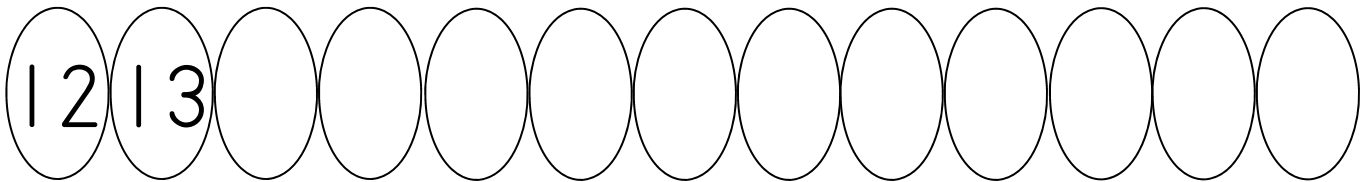
$$5 - 4 = \underline{\quad}$$

Name: _____

Score: _____

Morning Math

Continue counting. Color the number that is one less than 20 green.



Mark the math fact shown.



$4 + 4 = 8$

$6 + 2 = 8$

$4 + 3 = 7$

Which is largest?

- a penny a mouse a chair

Circle all numbers that are less than 7.

8 10 3 4 9 2

Write the number that comes after.

20, _____

$$\begin{array}{r} 5 \\ - 4 \\ \hline \end{array} \qquad \begin{array}{r} 3 \\ - 2 \\ \hline \end{array}$$

$$\begin{array}{r} 2 \\ + 4 \\ \hline \end{array} \qquad \begin{array}{r} 5 \\ + 3 \\ \hline \end{array}$$

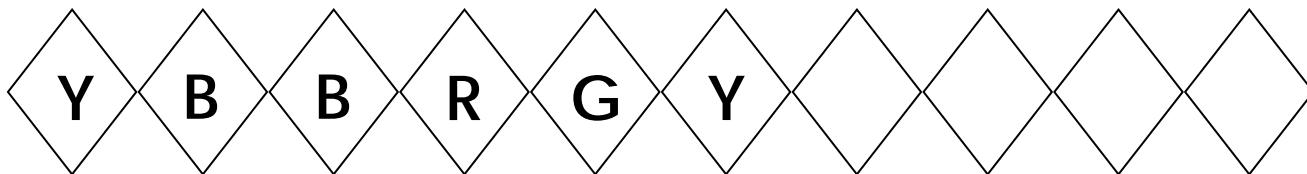
$6 + 2 = \underline{\hspace{2cm}}$

Name: _____

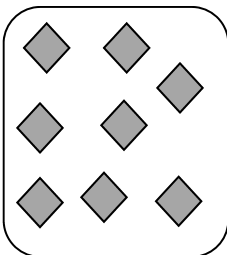
Score: _____

Morning Math

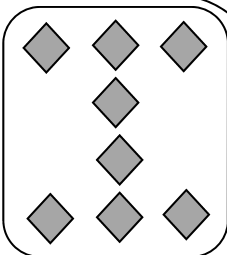
Color and continue the pattern. B=Blue, R=Red, G=Green, Y=Yellow



A.



B.



Which?

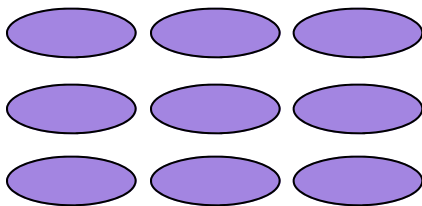
- Group A is greater than group B.
- Group A is less than group B.
- Group A is equal to group B.

Write an addition problem that has a sum of 10.

$$\begin{array}{r} + \\ \hline 10 \end{array}$$

Write today's day on the line.

Cross out 6 ovals.



How many ovals are left?

$$\begin{array}{r} 9 \\ - 6 \\ \hline \end{array}$$

$$\begin{array}{r} 5 \\ + 2 \\ \hline \end{array} \quad \begin{array}{r} 3 \\ + 3 \\ \hline \end{array}$$

$$5 - 5 = \underline{\quad}$$


$$4 - 3 = \underline{\quad}$$

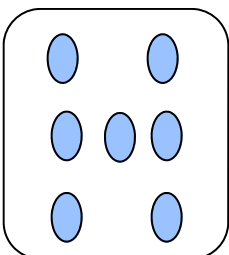
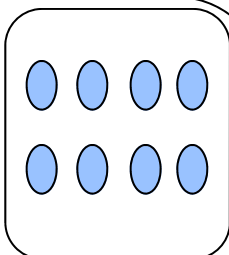
Name: _____

Score: _____

Math Homework

Color and continue the pattern. B=Blue, R=Red, G=Green, Y=Yellow



A.  B. 

Which?

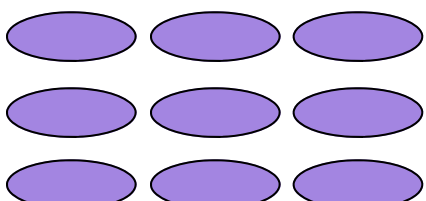
- Group A is greater than group B.
- Group A is less than group B.
- Group A is equal to group B.

Write an addition problem that has a sum of 10.

$$\begin{array}{r} + \\ \hline 10 \end{array}$$

Write today's day on the line.

Cross out 3 ovals.



How many ovals are left?

$$\begin{array}{r} 9 \\ - 3 \\ \hline \end{array}$$

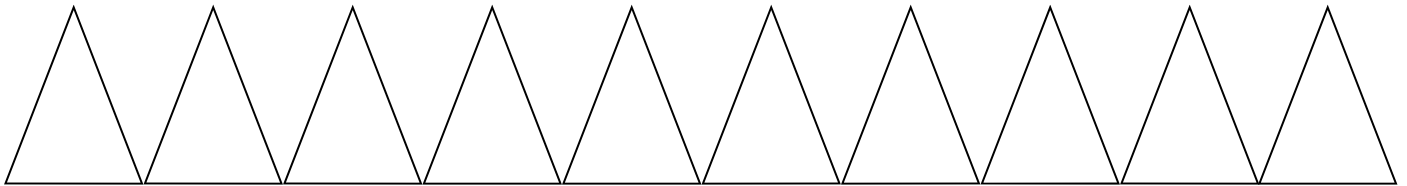
$$\begin{array}{r} 3 \\ + 0 \\ \hline \end{array} \quad \begin{array}{r} 5 \\ + 2 \\ \hline \end{array}$$
$$6 - 6 = \underline{\quad}$$
$$5 - 3 = \underline{\quad}$$

Name: _____

Score: _____

Morning Math Test

Write the numbers from 21 to 30. Color the number that is one more than 23 green.



- Draw 5 blue triangles.
- Draw 5 yellow triangles.

How many total triangles? _____

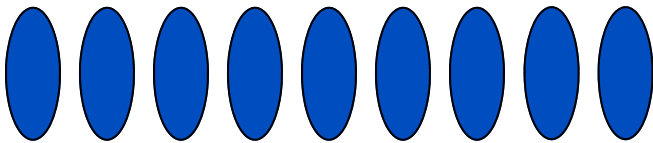
Write an addition problem that has a sum of 10.

$$\begin{array}{r} + \\ \hline 10 \end{array}$$

Which is shortest?

- a ruler a key a lion

Cross out 4 ovals.



How many ovals are left?

$$\begin{array}{r} 9 \\ - 4 \\ \hline \end{array}$$

$$\begin{array}{r} 6 \\ + 2 \\ \hline \end{array} \quad \begin{array}{r} 4 \\ + 3 \\ \hline \end{array}$$

$$5 - 2 = \underline{\quad}$$

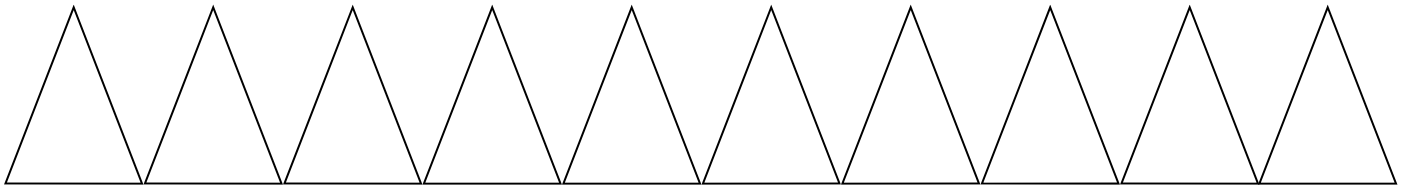
$$2 - 0 = \underline{\quad}$$

Name: _____

Score: _____

Math Homework

Write the numbers from 21 to 30. Color the number that is one less than 25 yellow.



- Draw three blue ovals.
- Draw four yellow ovals.

How many total ovals? _____

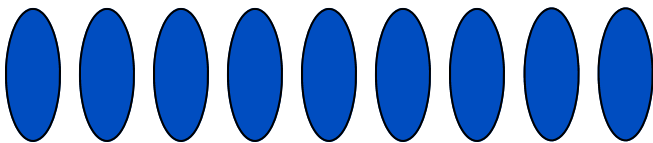
Write an addition problem that has a sum of 10.

$$\begin{array}{r} + \\ \hline 10 \end{array}$$

Which is longest?

- a snake a road a ruler

Cross out 5 ovals.



How many ovals are left?

$$\begin{array}{r} 9 \\ - 5 \\ \hline \end{array}$$

$$\begin{array}{r} 5 \\ + 3 \\ \hline \end{array}$$

$$\begin{array}{r} 4 \\ + 4 \\ \hline \end{array}$$

$$5 - 4 = \underline{\quad}$$

$$4 - 0 = \underline{\quad}$$