

Name: \_\_\_\_\_

Score: \_\_\_\_\_

### Daily Work

Today is: \_\_\_\_\_

Maryann walks 5 blocks to school five days a week.  
How many total blocks will Maryann walk in two weeks?  
Please circle the clue words and show your work.

Maryann will walk \_\_\_\_\_ total blocks.

Please complete.  177, 167, 157, _____, _____	Use +, -, x, or ÷:  63 <input type="text"/> 53 = 116	Round to the nearest hundred:  451 _____
---	--	--

Please complete the graph by coloring the following:


- 3 people like non-fiction books
- 10 people like mystery books
- 8 people like adventure books
- 6 people like science fiction books

Write a complete sentence answer to the questions about this picture.



1. What is hiding inside this dark cave?

\_\_\_\_\_

\_\_\_\_\_

2. What might happen next?

\_\_\_\_\_

\_\_\_\_\_

\_\_\_\_\_

Name: \_\_\_\_\_

Score: \_\_\_\_\_

### Daily Work

Today is: \_\_\_\_\_

---

Using the highest valued bills and coins, draw to show \$18.88.

What is three more than 1,028?  _____	Which number has a 5 in the ten thousands place?  <input type="radio"/> 53,602 <input type="radio"/> 36,052 <input type="radio"/> 35,260	Write $9,000 + 300 + 20 + 6$ in standard form:  _____
---	--	---

$$\begin{array}{r} 6,000 \\ - 4,318 \\ \hline \end{array}$$

$$\begin{array}{r} 3,866 \\ + 7,564 \\ \hline \end{array}$$

$$\begin{array}{r} 9 \\ \times 7 \\ \hline \end{array}$$

$$\begin{array}{r} 11 \\ \times 9 \\ \hline \end{array}$$

$$6 \overline{)54}$$

---

Write a short letter to a friend to thank him/her for a gift you were given.  
Please be sure to use the 5 parts of a friendly letter.

\_\_\_\_\_

\_\_\_\_\_

\_\_\_\_\_

\_\_\_\_\_

\_\_\_\_\_

\_\_\_\_\_

\_\_\_\_\_

\_\_\_\_\_

\_\_\_\_\_

\_\_\_\_\_

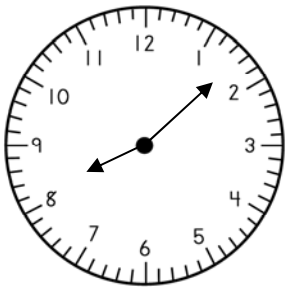
\_\_\_\_\_

Name: \_\_\_\_\_

Score: \_\_\_\_\_

### Daily Work

Today is: \_\_\_\_\_



What's the time?

It is night.

\_\_\_\_\_

What will the time be in three hours?

\_\_\_\_\_

What was the time three hours ago?


\_\_\_\_\_

Write an even number between 290 and 300 whose digits equal 19.

\_\_\_\_\_

Write the fraction.

\_\_\_\_\_



$$\begin{array}{r} 6,531 \\ - 4,576 \\ \hline \end{array}$$

$$\begin{array}{r} 7,876 \\ + 7,562 \\ \hline \end{array}$$

$$\begin{array}{r} 8 \\ \times 4 \\ \hline \end{array}$$

$$\begin{array}{r} 12 \\ \times 6 \\ \hline \end{array}$$

$$9 \overline{) 56}$$

- Use the editing marks to correct this sentence. Rewrite it correctly on the lines.

dr frank d donaldson he are an dentist At parker dental clinic in rochester new york

\_\_\_\_\_

\_\_\_\_\_

\_\_\_\_\_

- Please put the words into ABC order:

dentist	doctor	dental	dentists	doctors
---------	--------	--------	----------	---------

\_\_\_\_\_

\_\_\_\_\_

\_\_\_\_\_

- Please write an antonym for the underlined word.

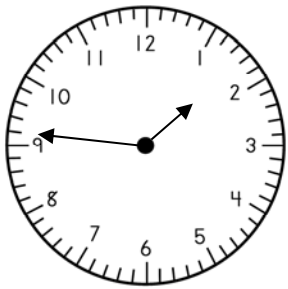
Dr. Donaldson will pull a bad tooth out of Jack's mouth. \_\_\_\_\_

Name: \_\_\_\_\_

Score: \_\_\_\_\_

## Daily Work

Today is: \_\_\_\_\_



What's the time?

It is afternoon.

\_\_\_\_\_

What will the time be  
in two hours?

\_\_\_\_\_

What was the time two  
hours ago?

\_\_\_\_\_

Please complete.

16, 24, 32, \_\_\_\_\_, \_\_\_\_\_

Please draw a  
fraction to show  
seven-tenths.

$$\begin{array}{r} 6,623 \\ - 4,853 \\ \hline \end{array}$$

$$\begin{array}{r} 7,565 \\ + 5,576 \\ \hline \end{array}$$

$$\begin{array}{r} 9 \\ \times 8 \\ \hline \end{array}$$

$$\begin{array}{r} 15 \\ \times 7 \\ \hline \end{array}$$

$$6 \overline{) 37}$$

- Please underline the verb and circle the adverb in this sentence.

The dog wandered around the backyard.

- Please combine the sentences in to one complete sentence.

Mrs. Larson bought six new rose bushes. Mrs. Larson planted the six rose bushes in her yard.

- Please circle the compound words in the sentence.

Teri walked down the hallway to her bedroom and put a new bedspread on her bed.

Name: \_\_\_\_\_

Score: \_\_\_\_\_

### Daily Work

Today is: \_\_\_\_\_

Complete today's pattern.

88, 80, 72, \_\_\_\_\_, \_\_\_\_\_, \_\_\_\_\_

Circle even numbers:

83      91      68  
56      74      102

Round to the nearest hundred:

425 \_\_\_\_\_

Show two different ways to make 94¢ Draw and label the coins.

Write the number that is in the hundred thousands place: 8,473,205 \_\_\_\_\_

Write this number in standard form:  $7000 + 900 + 10 + 3$  \_\_\_\_\_

Write this number in expanded form. 8,279 \_\_\_\_\_

Write two questions about the picture. Please be sure your questions are complete and very specific to the picture!



1. \_\_\_\_\_

\_\_\_\_\_

2. \_\_\_\_\_

\_\_\_\_\_