

Name: \_\_\_\_\_

Score: \_\_\_\_\_

### Daily Work

Today is: \_\_\_\_\_

How much?

\_\_\_\_\_



If three-eighths of a cake has been eaten, what fractional part is left? \_\_\_\_\_

$$7 \times 7 \times 7 + 9 + 3 + 6 + 2 = \underline{\hspace{2cm}}$$

$$\begin{array}{r} \$989.46 \\ - 684.18 \\ \hline \end{array}$$


$$\begin{array}{r} 685,912 \\ + 567,878 \\ \hline \end{array}$$

$$\begin{array}{r} 673 \\ \times \quad 7 \\ \hline \end{array}$$

$$3 \overline{) 279}$$

$$7 \overline{) 466}$$

Write a short paragraph to explain what Melinda got for her birthday and who gave this to her. Please be sure to follow all rules. Please indent!




---



---



---



---



---



---



---



---

Name: \_\_\_\_\_

Score: \_\_\_\_\_

### Daily Work

Today is: \_\_\_\_\_

Eric needs to buy 3 gallons of milk, but the store has only quarts of milk left. How many quarts will Eric need to buy? What do you need to know in order to solve this problem?

\_\_\_\_\_  
\_\_\_\_\_

Please complete.

63, 70, 77, \_\_\_\_\_, \_\_\_\_\_


Please solve:

$$\boxed{\phantom{000}} - 298 = 509$$

Round to the nearest thousand:


7,531 \_\_\_\_\_

Please complete this graph:



- 9 kids like basketball
- 7 kids like soccer
- 12 kids like football
- 5 kids like baseball

Write a complete sentence answer to the questions about this picture.



1. Who has just left on the plane to Boston?

\_\_\_\_\_  
\_\_\_\_\_

2. What will Marlene do after the plane is out of sight?

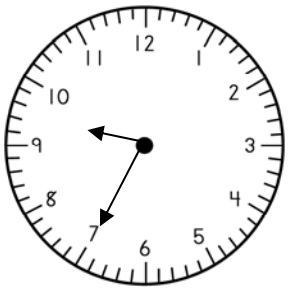
\_\_\_\_\_  
\_\_\_\_\_  
\_\_\_\_\_  
\_\_\_\_\_

Name: \_\_\_\_\_

Score: \_\_\_\_\_

### Daily Work

Today is: \_\_\_\_\_



What's the time?

It is morning.

\_\_\_\_\_

What will the time be in three hours?

\_\_\_\_\_

What was the time seven hours ago?

\_\_\_\_\_

Please complete.

33, 44, 55, \_\_\_\_\_, \_\_\_\_\_

Please draw a fraction to show seven-tenths.

$$\begin{array}{r} 37,514 \\ - 29,675 \\ \hline \end{array}$$

$$\begin{array}{r} 67,887 \\ + 46,098 \\ \hline \end{array}$$

$$\begin{array}{r} 94 \\ \times 36 \\ \hline \end{array}$$

$$\begin{array}{r} 672 \\ \times 6 \\ \hline \end{array}$$

$$4 \overline{) 556}$$

- Use the editing marks to correct this sentence. Rewrite it correctly on the lines.

tammy alanah and josie they is rideing on a huge rollercoaster at magic mountain

---



---



---

- Please put the words into ABC order:

fishing	fisherman	fished	fish	fishermen
---------	-----------	--------	------	-----------

---



---

- Please circle the compound words in the sentence.

Before the sun moves across the landscape and sets beyond the mountaintop, take a picture.

## Daily Work

Today is: \_\_\_\_\_

Lynn has \$612.37 in the bank. She just bought a new desk. The desk costs \$277.88 plus \$26.40 in tax. How much money does Lynn have left in the bank after her purchase?

Lynn will have \_\_\_\_\_ left in the bank.

- Find the sum of all the even numbers: \_\_\_\_\_

116                    142  
       129  
 73                    79  
           83  
 39                    194  
       68

Use > , < , or =

$15 \times 4 \times 3$    $11 \times 5 \times 5$

Which has the closest answer to 110?

- $12 \times 9$   
  $15 \times 4$   
  $11 \times 8$

Please finish:

48 , 60 , 72 , \_\_\_\_\_ , \_\_\_\_\_ , \_\_\_\_\_

Write a short paragraph to explain whether you think Jared is telling the truth about what just happened. Please indent! Please remember to read your paragraph for errors!




---



---



---



---



---



---



---



---



---



---

Name: \_\_\_\_\_

Score: \_\_\_\_\_

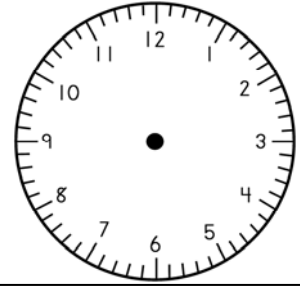
### Daily Work

Today is: \_\_\_\_\_

How much?



Draw the hands to show 8:52.




Write 19,563 in words.

\_\_\_\_\_

Skip count by 3 beginning with 27.

\_\_\_\_\_ / \_\_\_\_\_ / \_\_\_\_\_ / \_\_\_\_\_ / \_\_\_\_\_ / \_\_\_\_\_ / \_\_\_\_\_

Write a short paragraph that describes where they are and what will happen next.



\_\_\_\_\_  
\_\_\_\_\_  
\_\_\_\_\_  
\_\_\_\_\_  
\_\_\_\_\_  
\_\_\_\_\_  
\_\_\_\_\_